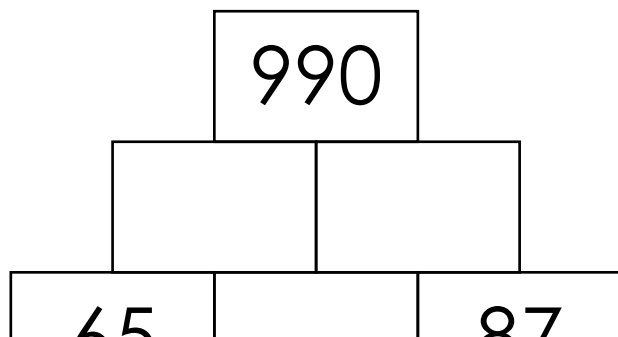
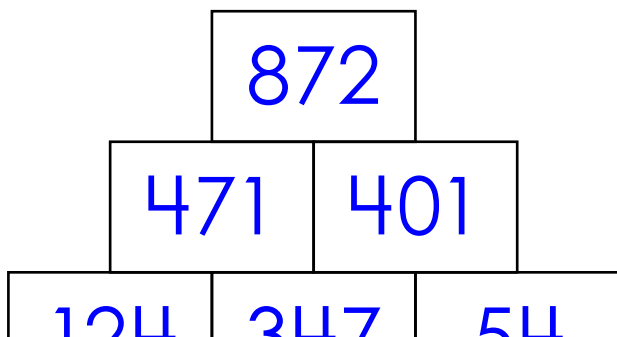


Name: _____

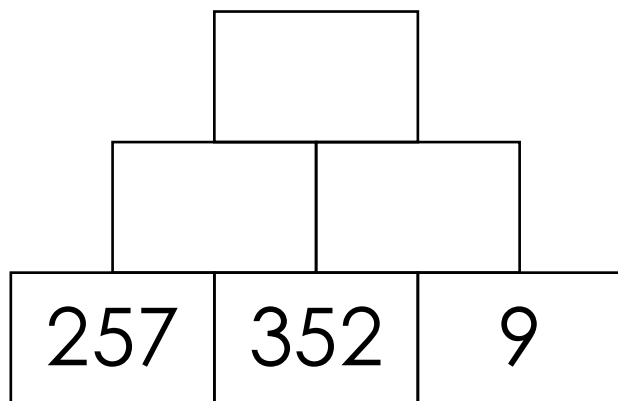
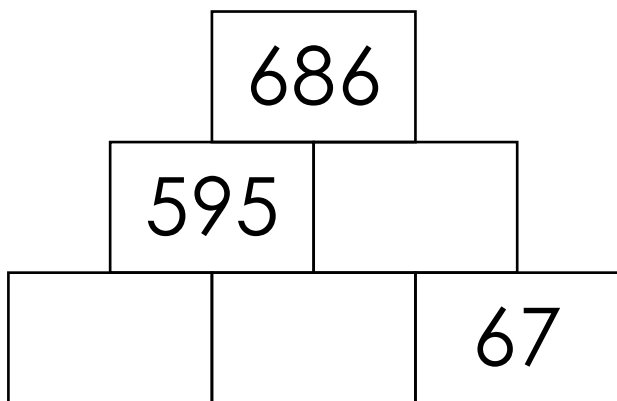
Number Pyramids

Each number in the pyramid is the sum of the two numbers directly below it. The first one has been done for you. Complete the rest.

Hint: the sum of the top is double the bottom center plus the two numbers in the bottom corners.



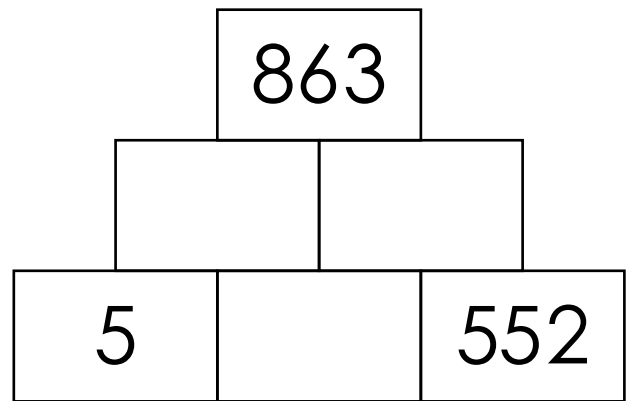
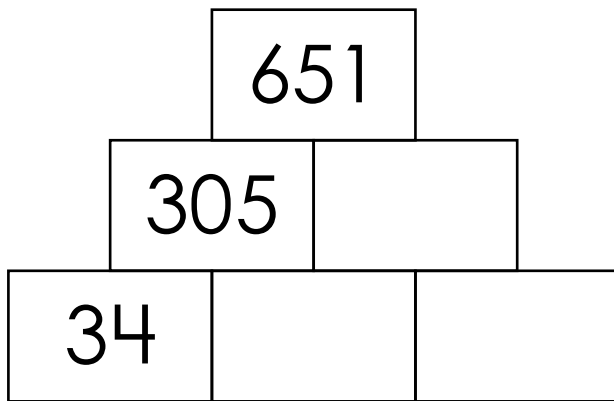
Preview
Please log in to download the printable version of this worksheet.



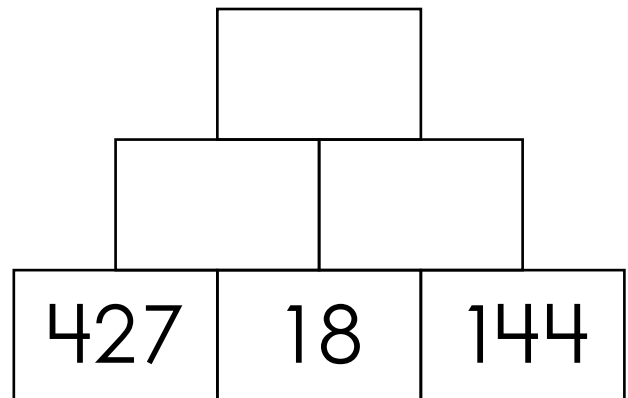
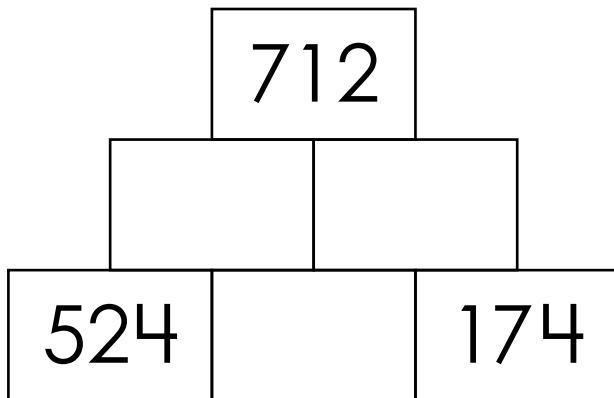
Name: _____

Number Pyramids

Hint: the sum of the top is double the bottom center plus the two numbers in the bottom corners.



Preview
Please log in to download
the printable version of this worksheet.



ANSWER KEY

Number Pyramids

Each number in the pyramid is the sum of the two numbers directly below it. The first one has been done for you. Complete the rest.

Hint: the sum of the top is double the bottom center plus the two numbers in the bottom corners.

Preview

Please log in to download
the printable version of this worksheet.



571

24

67

257

352

9

ANSWER KEY

Number Pyramids

Hint: the sum of the top is double the bottom center plus the two numbers in the bottom corners.

651

863

Preview

Please log in to download
the printable version of this worksheet.

