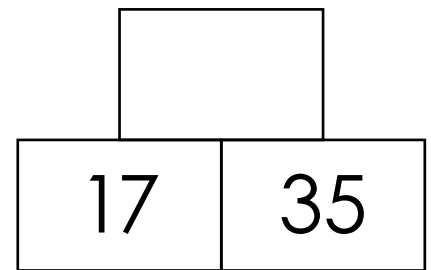
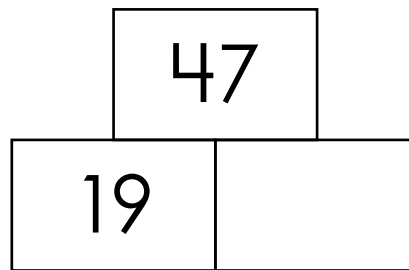
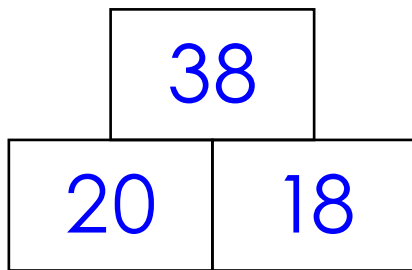


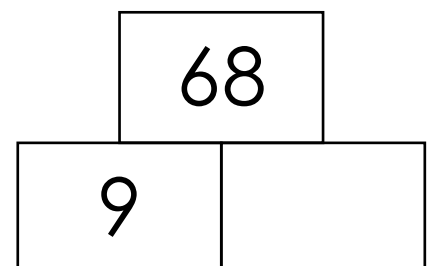
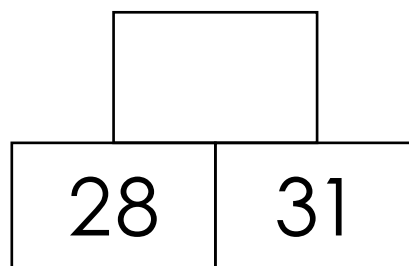
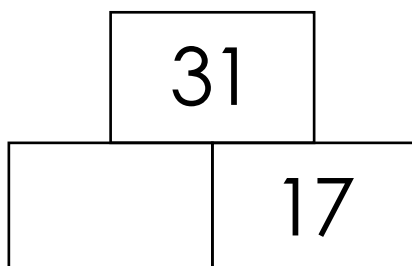
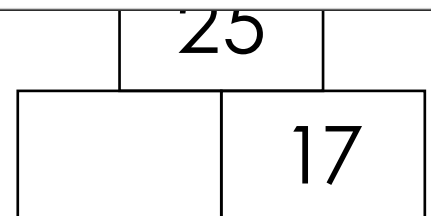
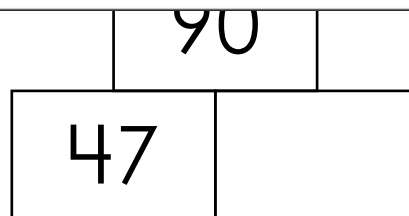
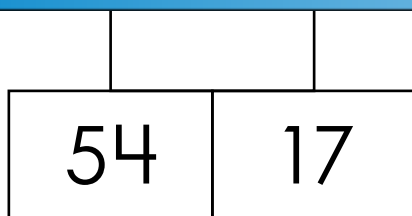
Name: _____

Number Pyramids

Each number in the pyramid is the sum of the two numbers directly below it. The first one has been done for you. Complete the rest.



Preview
Please log in to download the printable version of this worksheet.



ANSWER KEY

Number Pyramids

Each number in the pyramid is the sum of the two numbers directly below it. The first one has been done for you. Complete the rest.

38

47

52

Preview

Please log in to download
the printable version of this worksheet.



14

17

28

31

9

59