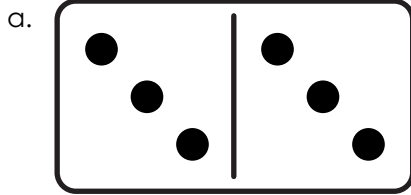



Name: _____

Add with Dominoes

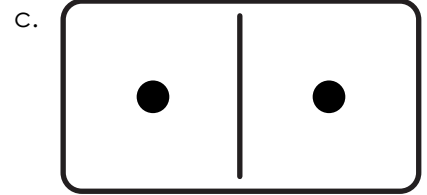
Doubles Facts



$$\underline{3} + \underline{3} = \underline{6}$$



$$\underline{\quad} + \underline{\quad} = \underline{\quad}$$



$$\underline{\quad} + \underline{\quad} = \underline{\quad}$$




Preview

Please log in to download the printable version of this worksheet.


$$\underline{\quad} + \underline{\quad} = \underline{\quad}$$

$$\underline{\quad} + \underline{\quad} = \underline{\quad}$$

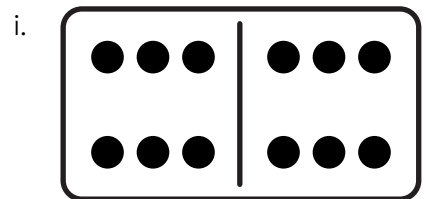
$$\underline{\quad} + \underline{\quad} = \underline{\quad}$$



$$\underline{\quad} + \underline{\quad} = \underline{\quad}$$



$$\underline{\quad} + \underline{\quad} = \underline{\quad}$$

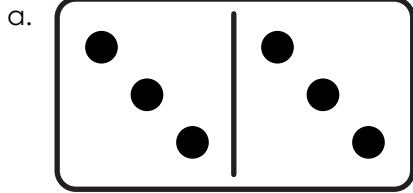


$$\underline{\quad} + \underline{\quad} = \underline{\quad}$$


ANSWER KEY

Add with Dominoes

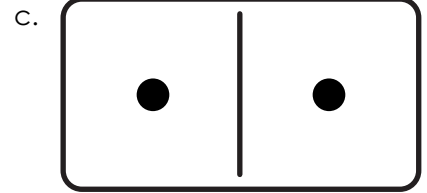
Doubles Facts



$$\underline{3} + \underline{3} = \underline{6}$$



$$\underline{5} + \underline{5} = \underline{10}$$



$$\underline{1} + \underline{1} = \underline{2}$$




Preview

Please log in to download the printable version of this worksheet.


$$\underline{7} + \underline{7} = \underline{14}$$

$$\underline{2} + \underline{2} = \underline{4}$$

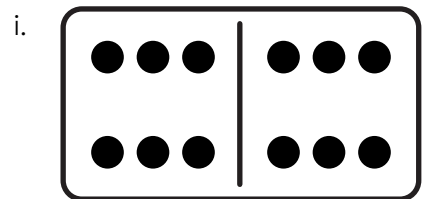
$$\underline{9} + \underline{9} = \underline{18}$$



$$\underline{8} + \underline{8} = \underline{16}$$



$$\underline{4} + \underline{4} = \underline{8}$$



$$\underline{6} + \underline{6} = \underline{12}$$