


Name: \_\_\_\_\_


# Addition

a.



$$\underline{4} + \underline{3} = \underline{\quad}$$

b.



$$\underline{\quad} + \underline{\quad} = \underline{\quad}$$

c.







**~ PREVIEW ~**

Please log in or register to download  
the printable version of this worksheet.

$$\underline{\quad} + \underline{\quad} = \underline{\quad}$$


$$\underline{\quad} + \underline{\quad} = \underline{\quad}$$

e.



$$\underline{\quad} + \underline{\quad} = \underline{\quad}$$

f.



$$\underline{\quad} + \underline{\quad} = \underline{\quad}$$