

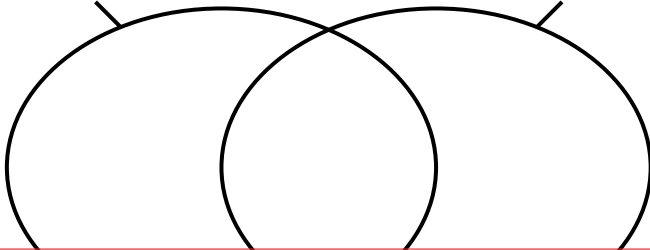
Name: _____

Assorted Venns

Place the numbers in the correct positions on the Venn diagrams.

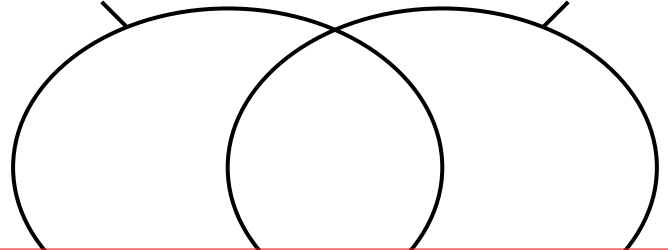
Numbers
less than
50

Numbers
greater
than 30



Even
numbers

Numbers
greater
than 20

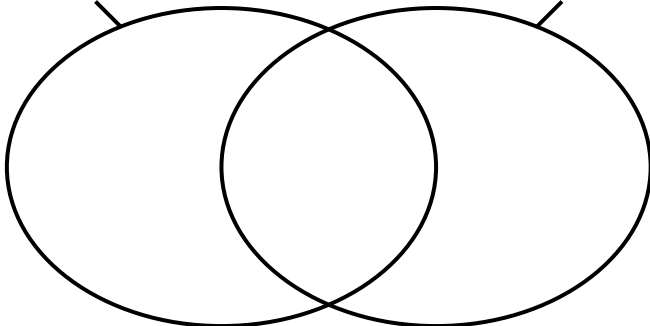


Preview

Please log in to download
the printable version of this worksheet.

Multiples of 2

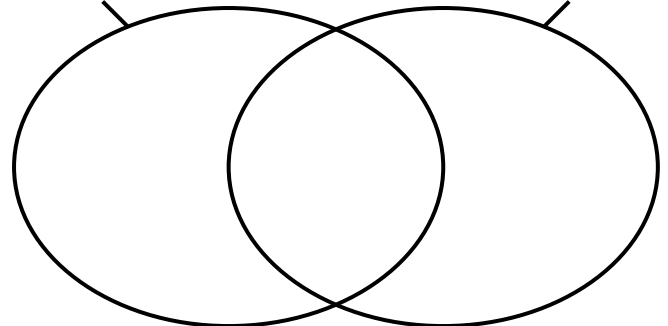
Multiples of 3



2	3	6	8
12	15	18	21

Numbers
less than
1

Numbers
greater
than 0.7



0.08	0.8	1.8	2.8
$\frac{1}{2}$	$1\frac{1}{2}$	$\frac{6}{100}$	$\frac{6}{10}$

ANSWER KEY

Assorted Venns

Place the numbers in the correct positions on the Venn diagrams.

Numbers
less than
50

Numbers
greater
than 30

Even
numbers

Numbers
greater
than 20

Preview

Please log in to download
the printable version of this worksheet.



2	3	6	8
12	15	18	21

0.08	0.8	1.8	2.8
$\frac{1}{2}$	$1\frac{1}{2}$	$\frac{6}{100}$	$\frac{6}{10}$