

Name: _____

Time to the Nearest Minute


Telling Time

To the Nearest Minute


Write the time shown on each clock.



___ : ___



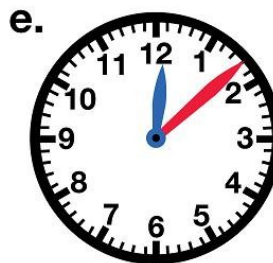
___ : ___



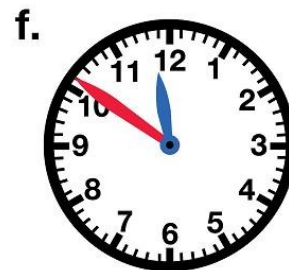
___ : ___



___ : ___




___ : ___



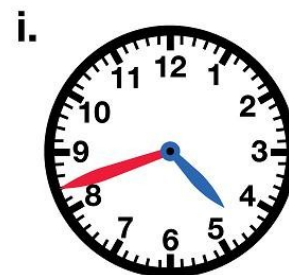
___ : ___



___ : ___



___ : ___



___ : ___

Name: _____

Time to the Nearest Minute

ANSWER KEY

Telling Time

To the Nearest Minute


Write the time shown on each clock.



9:29



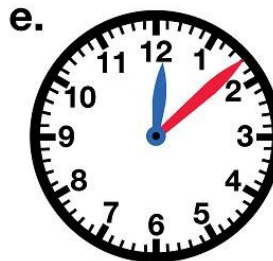
8:22



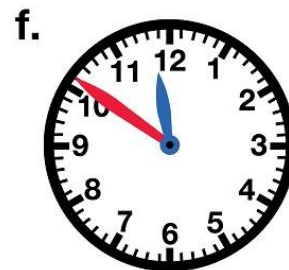
10:57



7:49



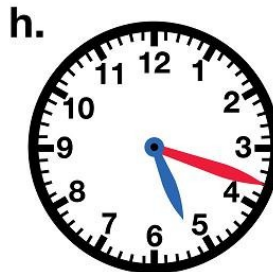
12:08



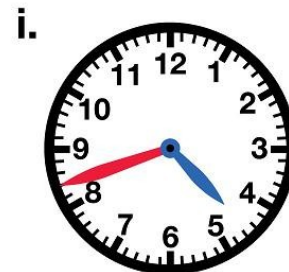
11:51



6:23



5:18



4:42