

Name: _____

Time to the Nearest Minute
(No Numbers on the Clock Faces)

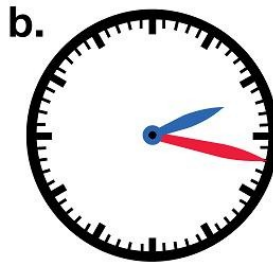
Telling Time

To the Nearest Minute

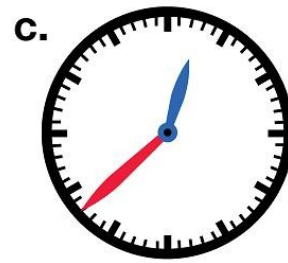
Write the time shown on each clock.



___ : ___



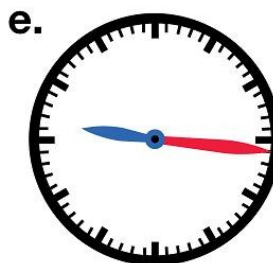
___ : ___




___ : ___



___ : ___



___ : ___



___ : ___



___ : ___



___ : ___



___ : ___

Name: _____

Time to the Nearest Minute
(No Numbers on the Clock Faces)

ANSWER KEY

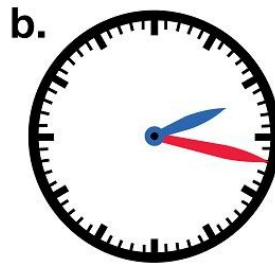
Telling Time

To the Nearest Minute

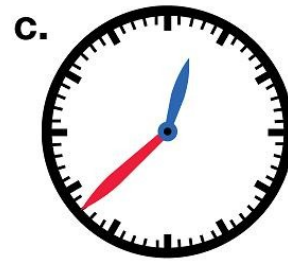
Write the time shown on each clock.



6:38



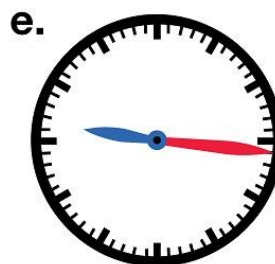
2:17




12:38



10:11



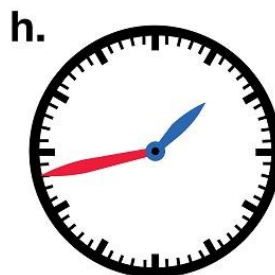
9:16



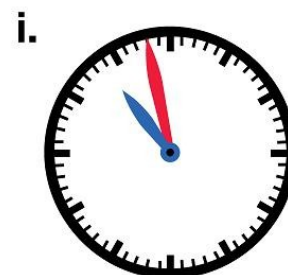
4:56



7:07



1:43



10:58