

Name: _____

Time to the Nearest Minute

Telling Time

To the Nearest Minute

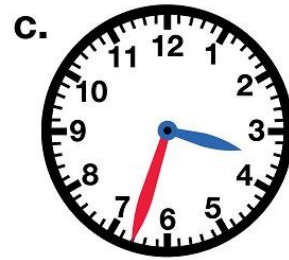
Write the time shown on each clock.



___ : ___



___ : ___



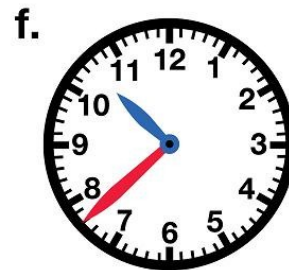
___ : ___



___ : ___



___ : ___



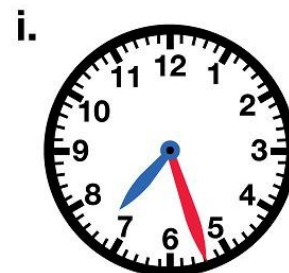
___ : ___



___ : ___



___ : ___



___ : ___

Name: _____

Time to the Nearest Minute

ANSWER KEY


Telling Time

To the Nearest Minute

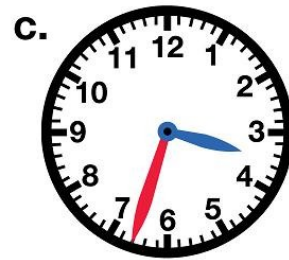
Write the time shown on each clock.



2:42



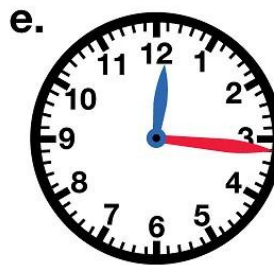
8:13



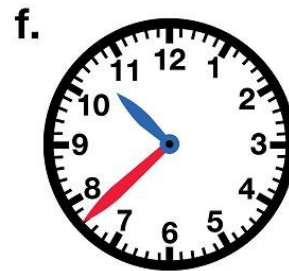
3:33



6:59



12:16



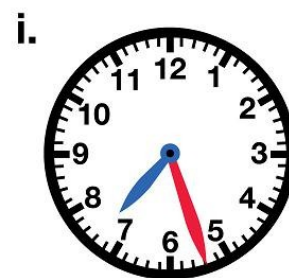
10:38



1:04



11:11



7:27