

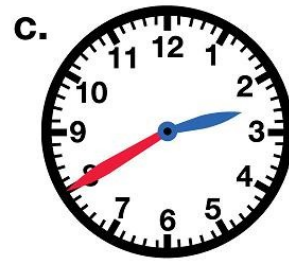

Name: \_\_\_\_\_

Time to the Nearest 5 Minutes

# Telling Time

To the Nearest 5 Minutes

Write the time shown on each clock.



**PREVIEW**

Please log in or register to download the printable version of this worksheet.



\_\_\_ : \_\_\_



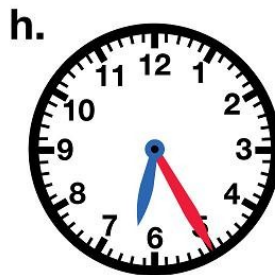
\_\_\_ : \_\_\_



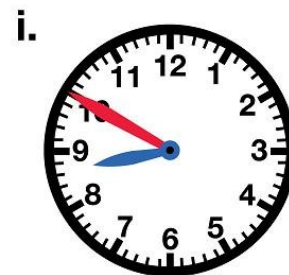
\_\_\_ : \_\_\_



\_\_\_ : \_\_\_



\_\_\_ : \_\_\_



\_\_\_ : \_\_\_

Name: \_\_\_\_\_

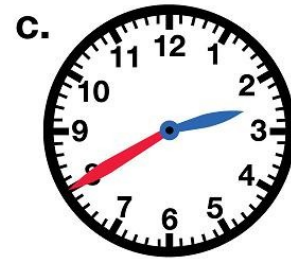

Time to the Nearest 5 Minutes

ANSWER KEY

# Telling Time

To the Nearest 5 Minutes

Write the time shown on each clock.



**PREVIEW**

Please log in or register to download the printable version of this worksheet.



12:15



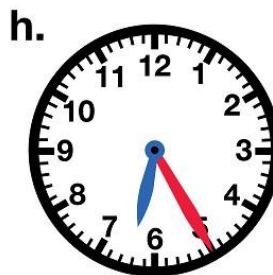
9:20



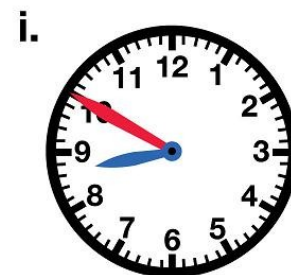
1:05



4:45



6:25



8:50