

Name: _____

Telling Time: Minutes To

For times with minutes between :31 and :59, you can say the time as “minutes to” the next hour.

examples:  - ten minutes to six

 - eleven minutes to one

Write each time in “*minutes to*” form.

a.  _____

b.  _____


c.  _____

d.  _____

e.  _____

f.  _____

g.  _____

h.  _____

i.  _____

j.  _____

k.  _____

ANSWER KEY

Telling Time: Minutes To


For times with minutes between :31 and :59, you can say the time as “minutes to” the next hour.

examples:  - ten minutes to six

 - eleven minutes to one

Write each time in “*minutes to*” form.


a.  **five minutes to seven**

b.  **one minute to three**

c.  **twenty minutes to eight**

d.  **twenty-five minutes to one**

e.  **ten minutes to nine**

f.  **four minutes to four**

g.  **three minutes to twelve**

h.  **nine minutes to five**

i.  **seventeen minutes to eleven**

j.  **twenty-nine minutes to six**

k.  **twelve minutes to ten**