


Name: \_\_\_\_\_

Time: Quarter Hours

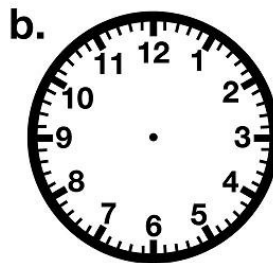
# Telling Time

Quarter Hours

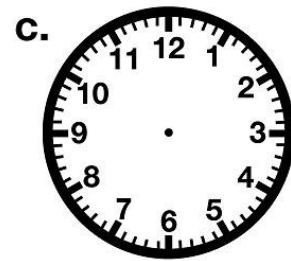
Draw hands on each clock face to show the given time.  
Be sure the hour hands are shorter than the minute hands.



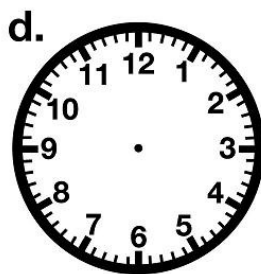
Quarter to 7



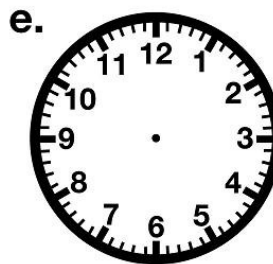
Quarter After 9



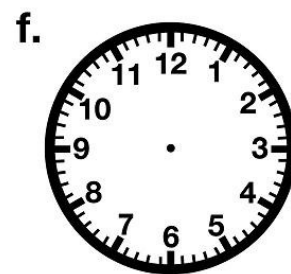
Half Past 1



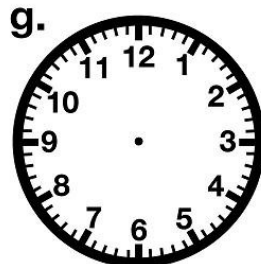
Quarter After 11



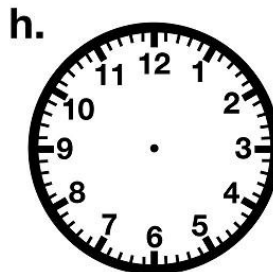
Half Past 5



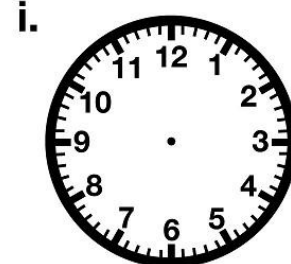
Quarter to 11



Half Past 12



Quarter to 4



Quarter After 6