

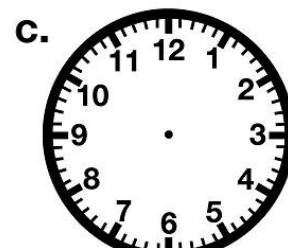


Name: _____

Time to the Nearest 5 Minutes

Telling Time


To the Nearest 5 Minutes

Draw hands on each clock face to show the given time.
Be sure the hour hands are shorter than the minute hands.



PREVIEW

Please log in or register to download the printable version of this worksheet.




5:30



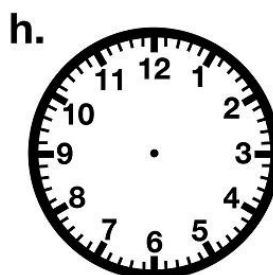
7:50



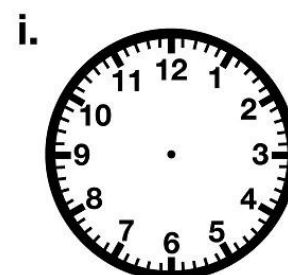
11:05



2:15



3:20



8:55