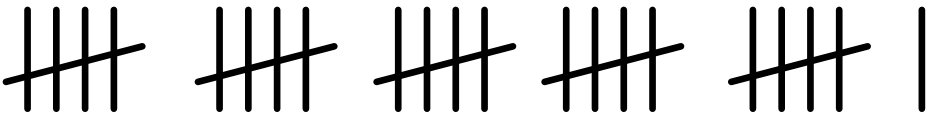


Name: _____

Tally Marks

Count the tally marks. Write the value of each set.

a. _____ 

b. _____ 

c. _____ 

d. _____ 

Draw tally marks to represent each number.

e. 18 _____

f. 9 _____

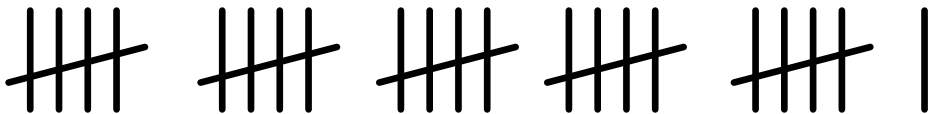
g. 23 _____

h. 15 _____

ANSWER KEY

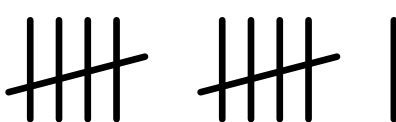
Tally Marks

Count the tally marks. Write the value of each set.

a. 26 

b. 8 

c. 19 

d. 11 

Draw tally marks to represent each number.

e. 18 

f. 9 

g. 23 

h. 15 