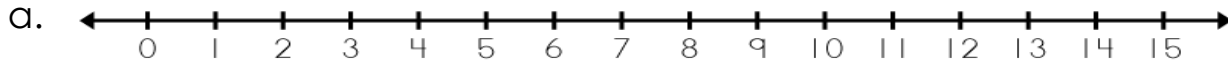


Name: \_\_\_\_\_

## Number Line Subtraction



$12 - \underline{\quad} = 9$

I started at \_\_\_\_\_.

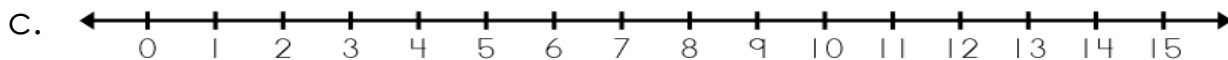
I counted back \_\_\_\_\_ spaces.

I stopped on \_\_\_\_\_.



I counted back \_\_\_\_\_ spaces.

I stopped on \_\_\_\_\_.



$10 - \underline{\quad} = 3$

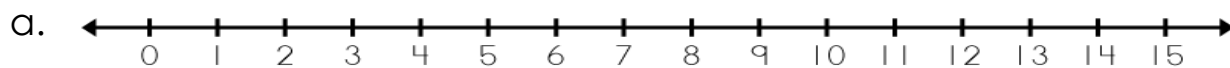
I started at \_\_\_\_\_.

I counted back \_\_\_\_\_ spaces.

I stopped on \_\_\_\_\_.

# ANSWER KEY

## Number Line Subtraction



$12 - 3 = 9$

I started at **12**.

I counted back **3** spaces.

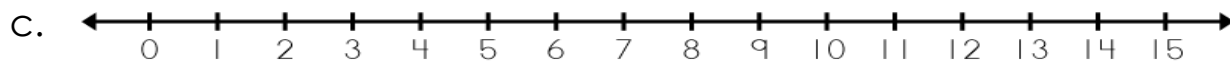
I stopped on **9**.



8

I counted back **2** spaces.

I stopped on **2**.



$10 - 7 = 3$

I started at **10**.

I counted back **7** spaces.

I stopped on **3**.