










Rounding Robots

Round the numbers on the robots to the nearest hundred. Draw a line from each robot to the correct battery.



PREVIEW

Please log in or register to download the printable version of this worksheet.



Rounding Robots
Answer Key

746 - 700

489 - 500

757 - 800

550 - 600

969 - 1,000

74 - 100

27 - 0

872 - 900

252 - 300

220 - 200

361 - 400

