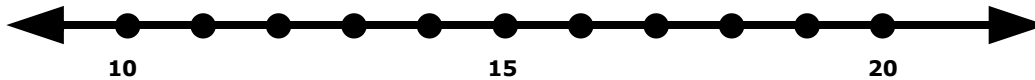


Name: \_\_\_\_\_

## Rounding to the Nearest Ten

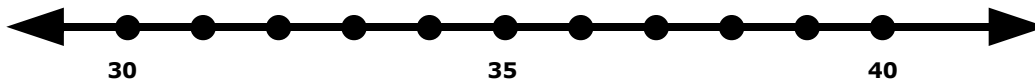
Find 16 on the number line and label it.



Is 16 closer to 10 or 20? \_\_\_\_\_

What is 16 rounded to the nearest 10? \_\_\_\_\_


Find 34 on the number line and label it.



Is 34 closer to 30 or 40? \_\_\_\_\_

What is 34 rounded to the nearest 10? \_\_\_\_\_

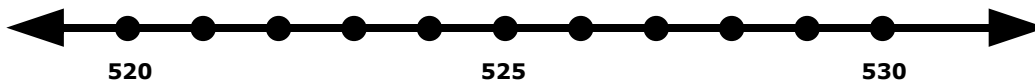
Find 138 on the number line and label it.



Is 138 closer to 130 or 140? \_\_\_\_\_

What is 138 rounded to the nearest 10? \_\_\_\_\_

Find 522 on the number line and label it.



Is 522 closer to 520 or 530? \_\_\_\_\_

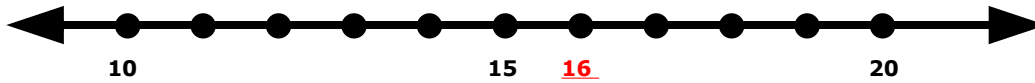
What is 522 rounded to the nearest 10? \_\_\_\_\_

Name: \_\_\_\_\_

**ANSWER KEY**

# Rounding to the Nearest Ten

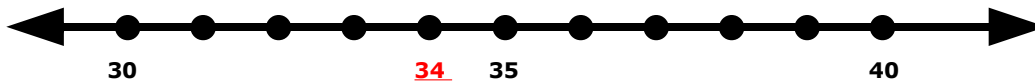
Find 16 on the number line and label it.



Is 16 closer to 10 or 20? **20**

What is 16 rounded to the nearest 10? **20**


Find 34 on the number line and label it.



Is 34 closer to 30 or 40? **30**

What is 34 rounded to the nearest 10? **30**

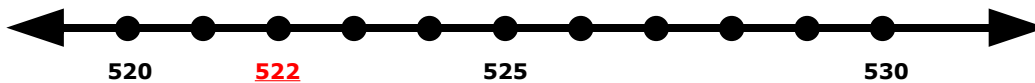
Find 138 on the number line and label it.



Is 138 closer to 130 or 140? **140**

What is 138 rounded to the nearest 10? **140**

Find 522 on the number line and label it.



Is 522 closer to 520 or 530? **520**

What is 522 rounded to the nearest 10? **520**