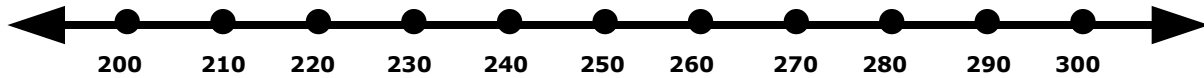


Name: _____

Rounding to the Nearest Hundred

Show where the number 234 would fall on the number line.

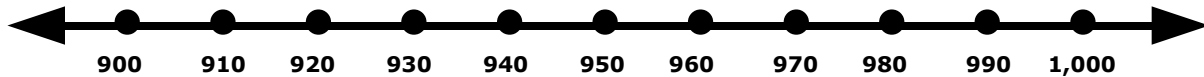


Is 234 closer to 200 or 300? _____

Does 234 round up or round down to the nearest hundred? _____

What is 234 rounded to the nearest hundred? _____

Show where the number 953 would fall on the number line.

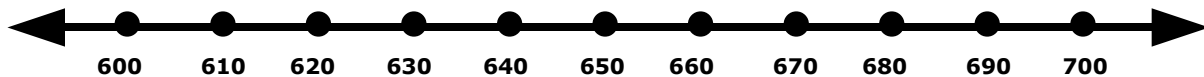


Is 953 closer to 900 or 1,000? _____

Does 953 round up or round down to the nearest hundred? _____

What is 953 rounded to the nearest hundred? _____

Show where the number 648 would fall on the number line.



Is 648 closer to 600 or 700? _____

Does 648 round up or round down to the nearest hundred? _____

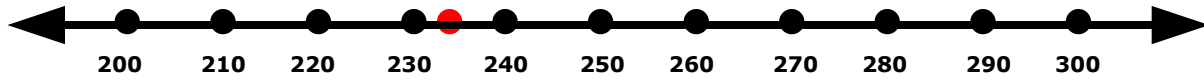
What is 648 rounded to the nearest hundred? _____

Name: _____

ANSWER KEY

Rounding to the Nearest Hundred

Show where the number 234 would fall on the number line.

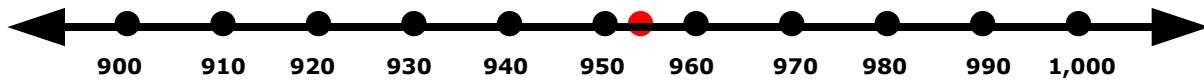


Is 234 closer to 200 or 300? **200**

Does 234 round up or round down to the nearest hundred? **round down**

What is 234 rounded to the nearest hundred? **200**

Show where the number 953 would fall on the number line.

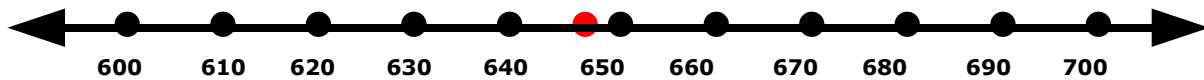


Is 953 closer to 900 or 1,000? **1,000**

Does 953 round up or round down to the nearest hundred? **round up**

What is 953 rounded to the nearest hundred? **1,000**

Show where the number 648 would fall on the number line.



Is 648 closer to 600 or 700? **600**

Does 648 round up or round down to the nearest hundred? **round down**

What is 648 rounded to the nearest hundred? **600**