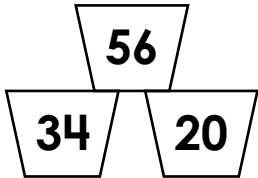




Name: _____

Ordering Numbers Least to Greatest

Look at each set of numbers and put them in the correct order from least to greatest.

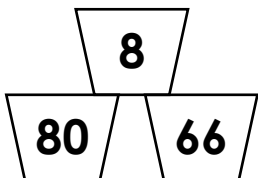
1.  _____ < _____ < _____

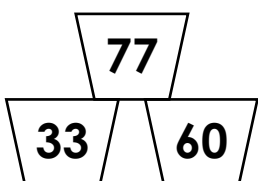
2. 



Preview

Please log in to download the printable version of this worksheet.

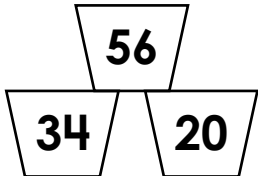
4.  _____ < _____ < _____

5.  _____ < _____ < _____

ANSWER KEY

Ordering Numbers Least to Greatest

Look at each set of numbers and put them in the correct order from least to greatest.

1.  $\underline{20} < \underline{34} < \underline{56}$

2. 



4. 

5. $\underline{33} < \underline{60} < \underline{77}$