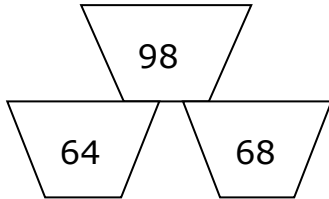


Name: \_\_\_\_\_

# Ordering Numbers Greatest to Least

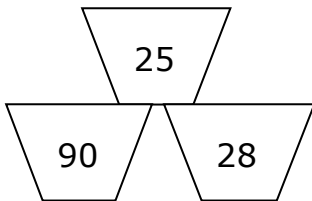
**Directions:** Look at each set of numbers and put them in the correct order from greatest to least.

1.



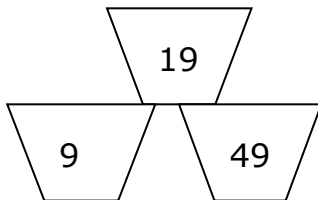
\_\_\_\_\_ > \_\_\_\_\_ > \_\_\_\_\_

2.



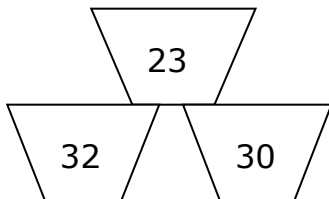
\_\_\_\_\_ > \_\_\_\_\_ > \_\_\_\_\_

3.



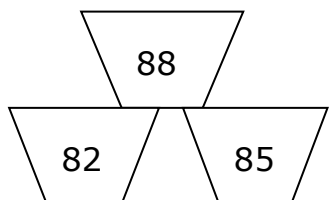
\_\_\_\_\_ > \_\_\_\_\_ > \_\_\_\_\_

4.



\_\_\_\_\_ > \_\_\_\_\_ > \_\_\_\_\_

5.



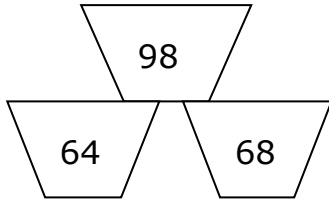
\_\_\_\_\_ > \_\_\_\_\_ > \_\_\_\_\_

Name: \_\_\_\_\_

# Ordering Numbers Greatest to Least

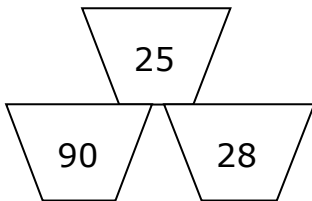
**Directions:** Look at each set of numbers and put them in the correct order from greatest to least.

1.



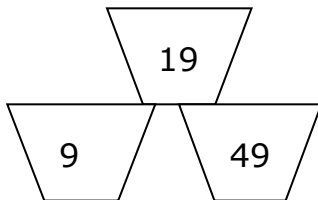
$$\underline{98} > \underline{68} > \underline{64}$$

2.



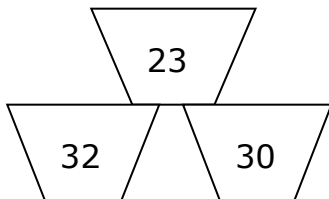
$$\underline{90} > \underline{28} > \underline{25}$$

3.



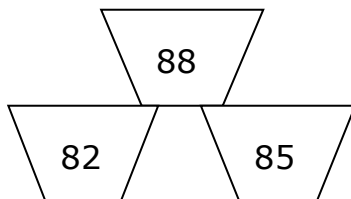
$$\underline{49} > \underline{19} > \underline{9}$$

4.



$$\underline{32} > \underline{30} > \underline{23}$$

5.



$$\underline{88} > \underline{85} > \underline{82}$$