





Name: \_\_\_\_\_

# Ancient Egyptian Numbers

Learn how to write like an ancient Egyptian.

	stick	1
	heel bone	10
	coiled rope	100

11 = 

64 = 

423 = 

507 = 

Write the ancient Egyptian numbers.

445 - \_\_\_\_\_

80 - \_\_\_\_\_

182 - \_\_\_\_\_

39 - \_\_\_\_\_

663 - \_\_\_\_\_

Name: \_\_\_\_\_

## Ancient Egyptian Numbers

Write the Arabic numerals.

⊖⊖|||| - \_\_\_\_\_

∩||||||| - \_\_\_\_\_

∩∩∩∩∩||||| - \_\_\_\_\_

⊖⊖⊖⊖∩∩∩∩∩ - \_\_\_\_\_

Add. Write the sums in ancient Egyptian.

$$\begin{array}{r} \text{⊖⊖⊖∩∩∩} \\ + \quad \text{⊖∩∩∩} \\ \hline \end{array}$$

$$\begin{array}{r} \text{⊖∩∩∩} \\ + \quad \text{∩∩} \\ \hline \end{array}$$




$$\begin{array}{r} \text{∩∩∩∩} \\ + \quad \text{∩∩∩∩} \\ \hline \end{array}$$


$$\begin{array}{r} \text{⊖⊖∩||||} \\ + \quad \text{⊖||||} \\ \hline \end{array}$$

# ANSWER KEY

## Ancient Egyptian Numbers

Learn how to write like an ancient Egyptian.

	stick	1
	heel bone	10
	coiled rope	100

$11 =$  

$64 =$  

$423 =$  

$507 =$  

Write the ancient Egyptian numbers.

$445 =$  

$80 =$  

$182 =$  

$39 =$  

$663 =$  

# ANSWER KEY

## Ancient Egyptian Numbers

Write the Arabic numerals.

$$\text{𐤀𐤀} \text{||||} - \underline{\hspace{2cm}} \quad \text{205}$$

$$\text{|||||} - \underline{\hspace{2cm}} \quad \text{19}$$

$$\text{|||||} - \underline{\hspace{2cm}} \quad \text{77}$$

$$\text{𐤀𐤀𐤀} \text{||||} - \underline{\hspace{2cm}} \quad \text{451}$$

Add. Write the sums in ancient Egyptian.

$$\begin{array}{r} \text{𐤀𐤀𐤀} \text{||||} \\ + \quad \text{𐤀} \text{||||} \\ \hline \text{𐤀𐤀𐤀} \text{𐤀} \text{||||} \end{array}$$

$$\begin{array}{r} \text{𐤀} \text{||||} \\ + \quad \text{||||} \\ \hline \text{𐤀} \text{||||} \end{array}$$

$$\begin{array}{r} \text{||||} \\ + \quad \text{||||} \\ \hline \text{𐤀} \end{array}$$

$$\begin{array}{r} \text{𐤀} \text{||||} \\ + \quad \text{||||} \\ \hline \text{𐤀} \text{||||} \end{array}$$