

Name: \_\_\_\_\_

# Place Value

Count the beads on each abacus and write the number they form. Be sure to place the comma in the correct place.

a.

○○○○○	O
○○	T
○○○○○○	H
○○○○	TH
○○○	TTH

\_\_\_\_\_

b.

○○○○	O
○○○○○	T
	H
○○○○○○○○	TH
○○○○○	TTH

\_\_\_\_\_

c.

○○○○○○○	O
○○○○○○○○	T
○○	H
	TH
○○○○○○○	TTH

\_\_\_\_\_

d.

○○○○○○○	O
	T
	H
○	TH
○○	TTH

\_\_\_\_\_



	TH
○○○○○○○	TTH

\_\_\_\_\_

	O
	T
	H
○○○○○○○○	TH
	TTH

\_\_\_\_\_

g.

○○○○○	O
○○○○○	T
○○○○○○○	H
○○	TH
○○○○	TTH

\_\_\_\_\_

h.

○○○○	O
○○○○○○○	T
○○○○	H
○○○○○○○○	TH
○	TTH

\_\_\_\_\_

i.

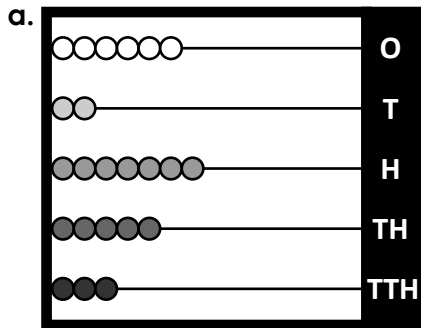
○○○○	O
○○○○○	T
○○○○○	H
○○○○○○	TH
○○○○○○○	TTH

\_\_\_\_\_

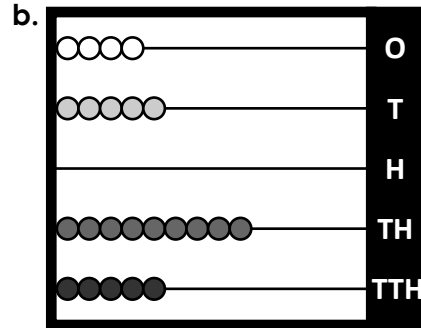
# ANSWER KEY

## Place Value

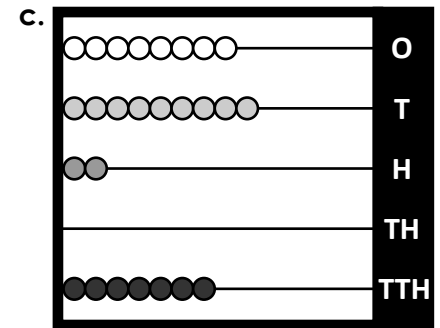
Count the beads on each abacus and write the number they form. Be sure to place the comma in the correct place.



35,726



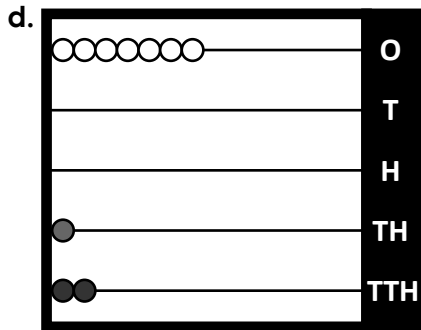
59,054



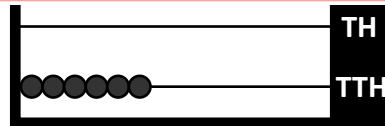
70,298

**PREVIEW**

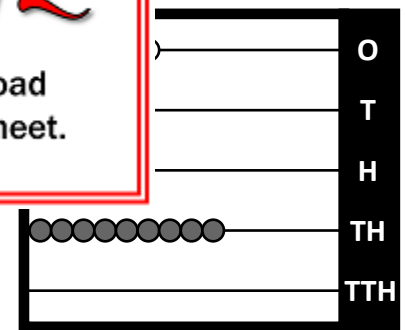
Please log in or register to download the printable version of this worksheet.



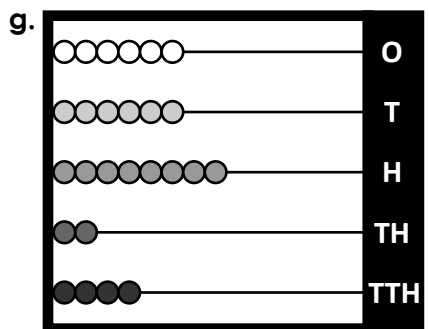
21,007



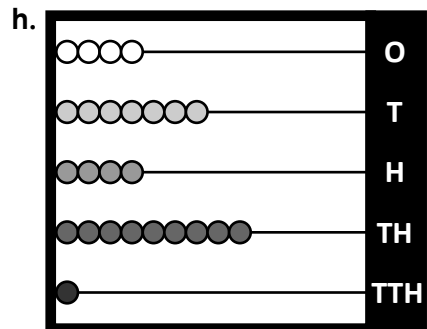
60,000



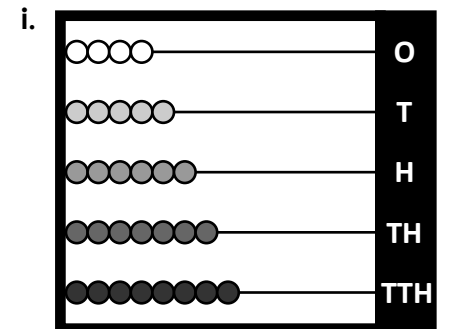
9,436



42,866



19,474



87,654