































Name: _____

The Pumpkin Carving Contest

Monica, Wayne, Kiersten, and Derrick were in a pumpkin carving contest. There was a prize for the person who carved the most pumpkins.

Number of Pumpkins Carved

Monica	      
Wayne	        
Kiersten	    
Derrick	        

 = 4 pumpkins

1. How
2. How
3. How
4. How



PREVIEW

Please log in or register to download the printable version of this worksheet.

5. How many more pumpkins did Derrick carve than Kiersten? 5. _____
6. How many pumpkins did Monica and Wayne carve in all? 6. _____
7. Which person carved the greatest number of pumpkins? 7. _____
8. Which person carved the least number of pumpkins? 8. _____
9. If Kiersten carved 4 more pumpkins, how many pumpkins would she have carved in all? 9. _____
10. If Monica had carved 6 fewer pumpkins, how many would she have carved? 10. _____
11. How many more pumpkins did Wayne carve than Monica? 11. _____
12. How many pumpkins did the 4 contestants carve altogether? 12. _____