







Name: _____

Fishing Trip Pictograph

Michael, Emily, Jose, Jennifer, and Kevin went on a fishing trip. The pictograph below shows how many fish each caught. Use the pictograph to answer the questions.

Number of Fish Caught

Michael	
Emily	
Jose	
Jennifer	
Kevin	

 = 6 fish






1. How many fish did Michael catch? 1. _____
2. How many fish did Emily catch? 2. _____
3. How many fish did Kevin catch? 3. _____
4. How many more fish did Emily catch than Jose? 4. _____
5. How many fish did the girls catch? 5. _____
6. How many fish did boys catch? 6. _____
7. How many more fish did the girls catch than the boys? 7. _____
8. How many fish did Jose and Kevin catch? 8. _____
9. Find the sum of the fish caught by all five people? 9. _____
10. Who caught fewer fish, Jennifer or Emily? 10. _____
11. Did Jennifer catch an odd or even number of fish? 11. _____
12. Jose said, "I caught a dozen fish!" Is he correct? Explain. 12. _____


ANSWER KEY

Fishing Trip Pictograph

Michael, Emily, Jose, Jennifer, and Kevin went on a fishing trip. The pictograph below shows how many fish each caught. Use the pictograph to answer the questions.

Number of Fish Caught

Michael	
Emily	
Jose	
Jennifer	
Kevin	

 = 6 fish

- How many fish did Michael catch? 1. 18 fish
- How many fish did Emily catch? 2. 36 fish
- How many fish did Kevin catch? 3. 15 fish
- How many more fish did Emily catch than Jose? 4. 24 more fish
- How many fish did the girls catch? 5. 78 fish
- How many fish did boys catch? 6. 45 fish
- How many more fish did the girls catch than the boys? 7. 33 more fish
- How many fish did Jose and Kevin catch? 8. 27 fish
- Find the sum of the fish caught by all five people? 9. 123 fish
- Who caught fewer fish, Jennifer or Emily? 10. Emily
- Did Jennifer catch an odd or even number of fish? 11. even
- Jose said, "I caught a dozen fish!" Is he correct? Explain. 12. Yes

A dozen is equal to 12 and two symbols is equal to 12 fish.