






Name: _____

Fishing Trip Pictograph

Michael, Emily, Joseph, Jennifer, and Kevin went on a fishing trip. Look at the pictograph below to see how many fish each person caught. Answer the questions below.

Number of Fish Caught

Michael	
Emily	
Joseph	
Jennifer	
Kevin	

 = 6 fish






1. How many fish did Michael catch? 1. _____
2. How many fish did Emily catch? 2. _____
3. How many fish did Kevin catch? 3. _____
4. How many more fish did Emily catch than Joseph? 4. _____
5. How many fish did the girls catch? 5. _____
6. How many fish did the boys catch? 6. _____
7. How many more fish did the girls catch than the boys? 7. _____
8. How many fish did Joseph and Kevin catch? 8. _____
9. Find the sum of the fish caught by all 5 people. 9. _____
10. Who caught fewer fish, Jennifer or Emily? 10. _____
11. Did Jennifer catch an odd or even number of fish? 11. _____
12. Joseph said, "I caught a dozen fish!" Is he correct? Explain.
12. _____


Name: _____

Fishing Trip Pictograph **ANSWER KEY**

Michael, Emily, Joseph, Jennifer, and Kevin went on a fishing trip. Look at the pictograph below to see how many fish each person caught. Answer the questions below.

Number of Fish Caught

Michael		18
Emily		36
Joseph		12
Jennifer		42
Kevin		15



1. How many fish did Michael catch? 1. **18 fish**
2. How many fish did Emily catch? 2. **36 fish**
3. How many fish did Kevin catch? 3. **15 fish**
4. How many more fish did Emily catch than Joseph? 4. **24 more fish**
5. How many fish did the girls catch? 5. **78 fish**
6. How many fish did the boys catch? 6. **45 fish**
7. How many more fish did the girls catch than the boys? 7. **33 more fish**
8. How many fish did Joseph and Kevin catch? 8. **27 fish**
9. Find the sum of the fish caught by all 5 people. 9. **123 fish**
10. Who caught fewer fish, Jennifer or Emily? 10. **Emily**
11. Did Jennifer catch an odd or even number of fish? 11. **even**
12. Joseph said, "I caught a dozen fish!" Is he correct? Explain.
12. **Yes because a dozen is 12 and two symbols makes a dozen.**