

























Name: \_\_\_\_\_

# A. I.

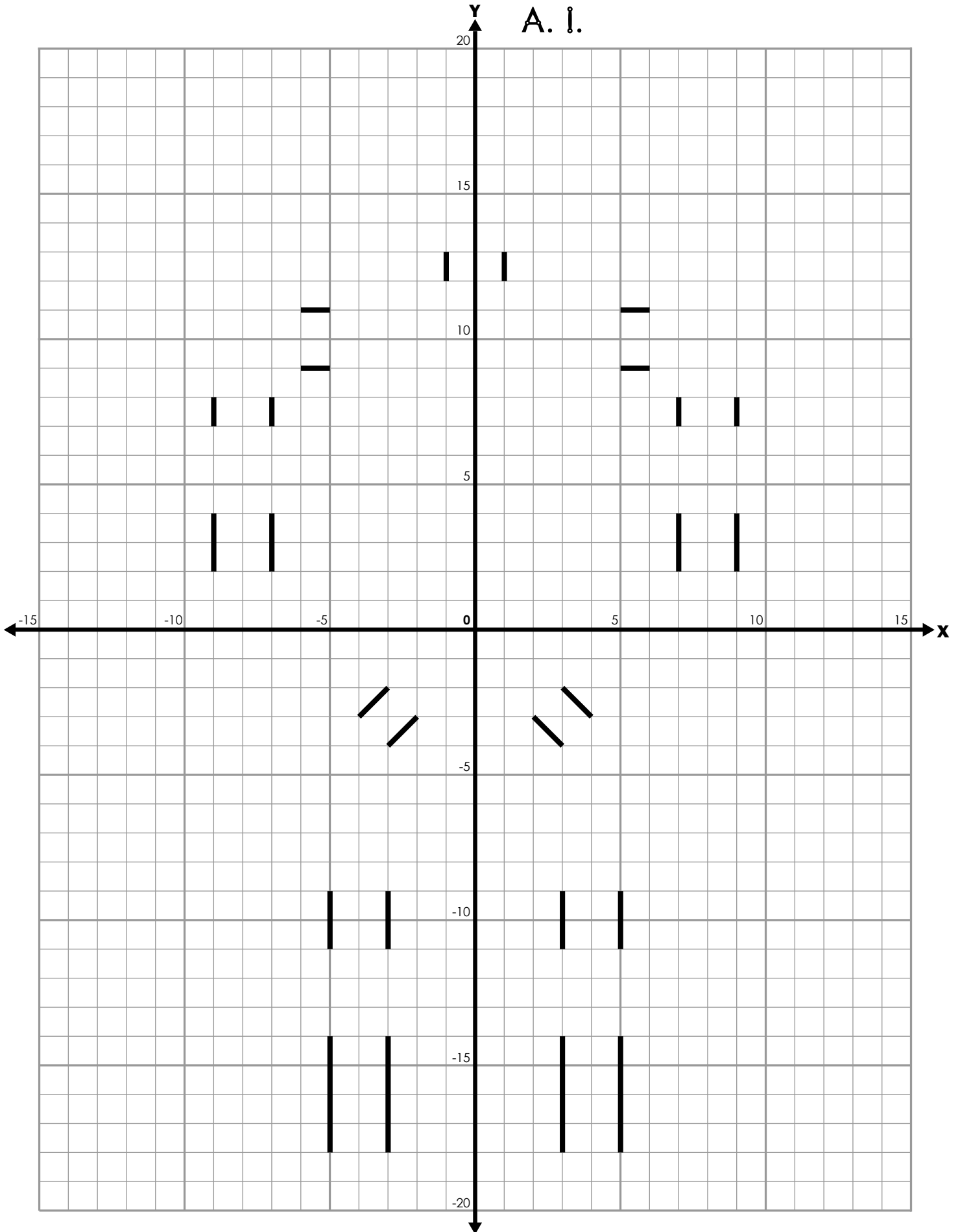
NOTE: In each section, do NOT connect the last point back to first point.

| <u>(X, Y)</u>   | <u>(X, Y)</u>   | <u>(X, Y)</u>   | <u>(X, Y)</u>   | <u>(X, Y)</u>   |
|---|---|---|---|---|
| <input type="checkbox"/> (1, -20)   | <input type="checkbox"/> (2, -5)  | <input type="checkbox"/> (3, 19)  | <input type="checkbox"/> (-6, 6)  | <input type="checkbox"/> (-6, 1)  |
| <input type="checkbox"/> (1, -19)   | <input type="checkbox"/> (5, -2)  | <input type="checkbox"/> (-3, 19)   | <input type="checkbox"/> (-7, 7)  | <input type="checkbox"/> (-6, -1)   |
| <input type="checkbox"/> (3, -18)   | <input type="checkbox"/> (6, -2)  | <input type="checkbox"/> (-4, 18)   | <input type="checkbox"/> (-9, 7)  | <input type="checkbox"/> (-7, -1)   |
| <input type="checkbox"/> (5, -18)   | <input type="checkbox"/> (6, -8)  | <input type="checkbox"/> (-4, 14)   | <input type="checkbox"/> (-10, 6)   | <input type="checkbox"/> (-7, 0)  |
| <input type="checkbox"/> (7, -19)   | <input type="checkbox"/> (5, -9)  | <input type="checkbox"/> (-3, 13)   | <input type="checkbox"/> (-10, 5)   | <input type="checkbox"/> (-8, 1)  |
| <input type="checkbox"/> (7, -20)   | <input type="checkbox"/> (3, -9)  | <input type="checkbox"/> (3, 13)  | <input type="checkbox"/> (-9, 4)  | <input type="checkbox"/> (-9, 0)  |
| <input type="checkbox"/> (1, -20)   | <input type="checkbox"/> (2, -8)  | <input type="checkbox"/> (4, 14)  | <input type="checkbox"/> (-7, 4)  | <input type="checkbox"/> (-9, -2)   |
|    | <input type="checkbox"/> (2, -5)  | <input type="checkbox"/> (4, 18)  | <input type="checkbox"/> (-6, 5)  | <input type="checkbox"/> (-10, -2)  |
|   |    | <input type="checkbox"/> (3, 19)  | <input type="checkbox"/> (-6, 6)  | <input type="checkbox"/> (-10, 1)   |
|   |   |    |    | <input type="checkbox"/> (-9, 2)  |
| <input type="checkbox"/> (-1, -20)  | <input type="checkbox"/> (-2, -5)   |   |   | <input type="checkbox"/> (-7, 2)  |
| <input type="checkbox"/> (-1, -19)  | <input type="checkbox"/> (-5, -2)   | <input type="checkbox"/> (-6, 11)   | <input type="checkbox"/> (6, 6)   | <input type="checkbox"/> (-6, 1)  |
| <input type="checkbox"/> (-3, -18)  | <input type="checkbox"/> (-6, -2)   | <input type="checkbox"/> (-7, 12)   | <input type="checkbox"/> (7, 7)   |    |
| <input type="checkbox"/> (-5, -18)  | <input type="checkbox"/> (-6, -8)   | <input type="checkbox"/> (-9, 12)   | <input type="checkbox"/> (9, 7)   |   |
| <input type="checkbox"/> (-7, -19)  | <input type="checkbox"/> (-5, -9)   | <input type="checkbox"/> (-10, 11)  | <input type="checkbox"/> (10, 6)  | <input type="checkbox"/> (1, 16)  |
| <input type="checkbox"/> (-7, -20)  | <input type="checkbox"/> (-3, -9)   | <input type="checkbox"/> (-10, 9)   | <input type="checkbox"/> (10, 5)  | <input type="checkbox"/> (3, 16)  |
| <input type="checkbox"/> (-1, -20)  | <input type="checkbox"/> (-2, -8)   | <input type="checkbox"/> (-9, 8)  | <input type="checkbox"/> (9, 4)   | <input type="checkbox"/> (3, 18)  |
|    | <input type="checkbox"/> (-2, -5)   | <input type="checkbox"/> (-7, 8)  | <input type="checkbox"/> (7, 4)   | <input type="checkbox"/> (1, 18)  |
|   |   | <input type="checkbox"/> (-6, 9)  | <input type="checkbox"/> (6, 5)   | <input type="checkbox"/> (1, 16)  |
| <input type="checkbox"/> (3, -14)   |   | <input type="checkbox"/> (-6, 11)   | <input type="checkbox"/> (6, 6)   |  |
| <input type="checkbox"/> (5, -14)   |   |  |  |   |
| <input type="checkbox"/> (6, -13)   | <input type="checkbox"/> (1, -4)  |   |   | <input type="checkbox"/> (-1, 16)   |
| <input type="checkbox"/> (6, -12)   | <input type="checkbox"/> (4, -1)  | <input type="checkbox"/> (6, 11)  | <input type="checkbox"/> (6, 1)   | <input type="checkbox"/> (-3, 16)   |
| <input type="checkbox"/> (5, -11)   | <input type="checkbox"/> (4, 1)   | <input type="checkbox"/> (7, 12)  | <input type="checkbox"/> (6, -1)  | <input type="checkbox"/> (-3, 18)   |
| <input type="checkbox"/> (3, -11)   | <input type="checkbox"/> (-4, 1)  | <input type="checkbox"/> (9, 12)  | <input type="checkbox"/> (7, -1)  | <input type="checkbox"/> (-1, 18)   |
| <input type="checkbox"/> (2, -12)   | <input type="checkbox"/> (-4, -1)   | <input type="checkbox"/> (10, 11)   | <input type="checkbox"/> (7, 0)   | <input type="checkbox"/> (-1, 16)   |
| <input type="checkbox"/> (2, -13)   | <input type="checkbox"/> (-1, -4)   | <input type="checkbox"/> (10, 9)  | <input type="checkbox"/> (8, 1)   |  |
| <input type="checkbox"/> (3, -14)   | <input type="checkbox"/> (1, -4)  | <input type="checkbox"/> (9, 8)   | <input type="checkbox"/> (9, 0)   |   |
|  |  | <input type="checkbox"/> (7, 8)   | <input type="checkbox"/> (9, -2)  | <input type="checkbox"/> (-3, 11)   |
|   |   | <input type="checkbox"/> (6, 9)   | <input type="checkbox"/> (10, -2)   | <input type="checkbox"/> (-3, 8)  |
| <input type="checkbox"/> (-3, -14)  | <input type="checkbox"/> (-3, 4)  | <input type="checkbox"/> (6, 11)  | <input type="checkbox"/> (10, 1)  | <input type="checkbox"/> (3, 8)   |
| <input type="checkbox"/> (-5, -14)  | <input type="checkbox"/> (-5, 8)  |  | <input type="checkbox"/> (9, 2)   | <input type="checkbox"/> (3, 11)  |
| <input type="checkbox"/> (-6, -13)  | <input type="checkbox"/> (-5, 12)   |   | <input type="checkbox"/> (7, 2)   | <input type="checkbox"/> (-3, 11)   |
| <input type="checkbox"/> (-6, -12)  | <input type="checkbox"/> (5, 12)  | <input type="checkbox"/> (-2, 19)   | <input type="checkbox"/> (6, 1)   |  |
| <input type="checkbox"/> (-5, -11)  | <input type="checkbox"/> (5, 8)   | <input type="checkbox"/> (-2, 20)   |  |   |
| <input type="checkbox"/> (-3, -11)  | <input type="checkbox"/> (3, 4)   | <input type="checkbox"/> (2, 20)  |   | <input type="checkbox"/> (-2, 4)  |
| <input type="checkbox"/> (-2, -12)  | <input type="checkbox"/> (-3, 4)  | <input type="checkbox"/> (2, 19)  |  | <input type="checkbox"/> (-2, 1)  |
| <input type="checkbox"/> (-2, -13)  |  |  | <input type="checkbox"/> (2, 15)  |  |
| <input type="checkbox"/> (-3, -14)  |   | <input type="checkbox"/> (2, 4)   | <input type="checkbox"/> (2, 14)  |   |
|  |   | <input type="checkbox"/> (2, 1)   | <input type="checkbox"/> (-2, 14)   |  |
|   |   |  | <input type="checkbox"/> (-2, 15)   |   |
|   |   |   | <input type="checkbox"/> (2, 15)  |  |

Now color your picture.

Name: \_\_\_\_\_

A. i.



# ANSWER KEY

A. I.

