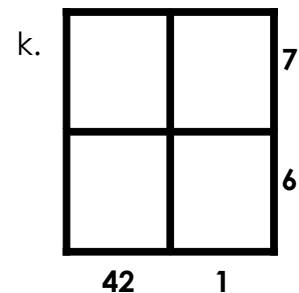
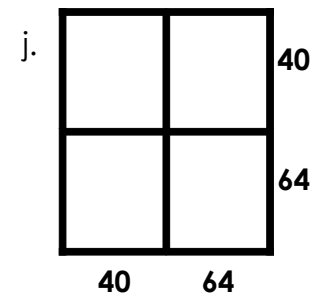
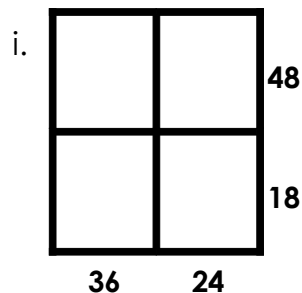
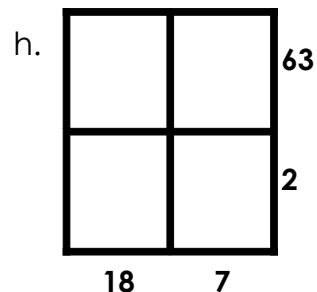
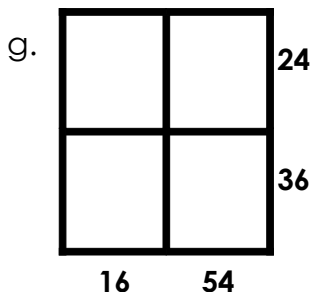
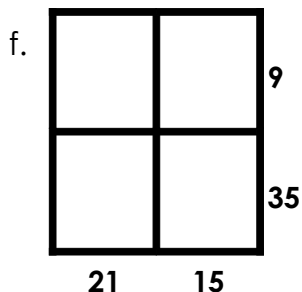
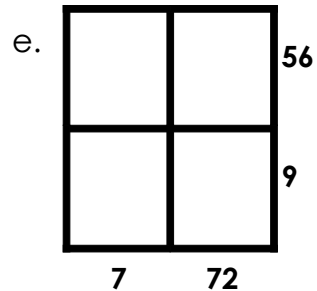
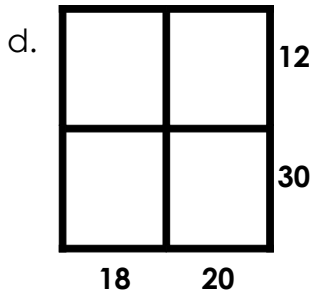
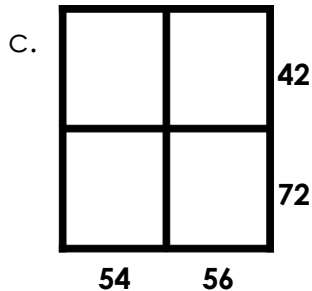
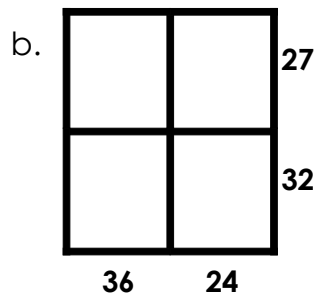
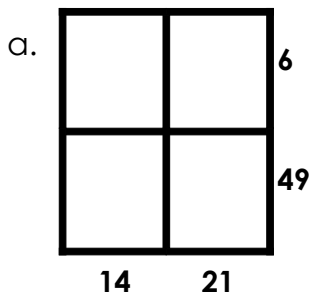
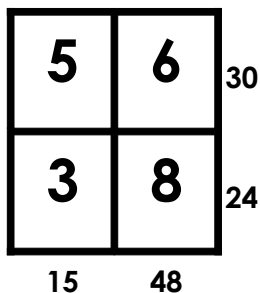


Name: _____

Multiplication Square Puzzles

Fill in each square with sets of factors so that the products on the right-hand side and the bottom are correct.

example:



ANSWER KEY

Multiplication Squares

Fill in each square with sets of factors so that the products on the right-hand side and the bottom are correct.

ex:

5	6	30
3	8	24
15	48	

a.

2	3	6
7	7	49
14	21	

b.

9	3	27
4	8	32
36	24	

c.

6	7	42
9	8	72
54	56	

d.

3	4	12
6	5	30
18	20	

e.

7	8	56
1	9	9
7	72	

f.

3	3	9
7	5	35
21	15	

g.

4	6	24
4	9	36
16	54	

h.

9	7	63
2	1	2
18	7	

i.

6	8	48
6	3	18
36	24	

j.

5	8	40
8	8	64
40	64	

k.

7	1	7
6	1	6
42	1	