



Find the total cost of the items shown.  
Show your work.




Total cost: \_\_\_\_\_



Total cost: \_\_\_\_\_



Total cost: \_\_\_\_\_

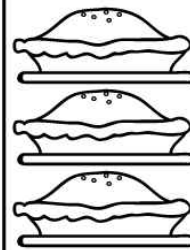


Total cost: \_\_\_\_\_


# Village Bakery

## Prices

Chocolate Chip Cookies.....	3 for 99¢
Donuts.....	.78¢ ea.
Pretzels.....	.97¢ ea.
Cupcakes.....	\$1.06 ea.
Pies.....	\$7.25 ea.
Cakes.....	\$8.98 ea.



Total cost: \_\_\_\_\_



Total cost: \_\_\_\_\_

## ANSWER KEY

1. 9 Cupcakes = \$9.54

2. 15 Cookies = \$4.95

3. 4 cakes = \$35.92

4. 6 donuts = \$4.68

5. 3 pies = \$21.75

6. 2 pretzels = \$1.94