


Name: _____

Animal Parts Multiplication

1. How many legs are on seven beetles?




$_____ \times _____ = _____$

2. How many arms are on four octopi?



$_____ \times _____ = _____$

3. How many ears are on nine rabbits?



$_____ \times _____ = _____$

4. How many arms are on _____



$_____ \times _____ = _____$

5. How many legs _____

$_____ \times _____ = _____$

6. How many horns are on _____ bison?

$_____ \times _____ = _____$

 **PREVIEW** 

Please log in or register to download the printable version of this worksheet.

How many legs are on four cows?

$_____ \times _____ = _____$

How many fingers on three kids?

$_____ \times _____ = _____$

How many horns are on four unicorns?

$_____ \times _____ = _____$

How many wings on seven birds?

$_____ \times _____ = _____$

How many legs are on six ants?







$_____ \times _____ = _____$

How many legs are on ten worms?

$_____ \times _____ = _____$

Name: _____

Animal Parts Multiplication – ANSWER KEY

<p>1. How many legs are on seven beetles?</p>  <p>$7 \times 6 = 42$</p>	<p>2. How many arms are on four octopi?</p>  <p>$4 \times 8 = 32$</p>	<p>3. How many ears are on nine rabbits?</p>  <p>$2 \times 9 = 18$</p>
<p>4. How many arms are on 8 superheroes?</p>  <p><u>$8 \times 5 = 40$</u></p>	<p>5. How many legs are on 7 worms?</p>  <p><u>$7 \times 4 = 28$</u></p>	<p>6. How many horns are on 3 bison?</p>  <p><u>$3 \times 2 = 6$</u></p>

~ PREVIEW ~
Please log in or register to download the printable version of this worksheet.

How many legs are on four cows? **$4 \times 4 = 16$**

How many fingers on three kids? **$10 \times 3 = 30$**

How many horns are on four unicorns? **$4 \times 1 = 4$**

How many wings on seven birds? **$7 \times 2 = 14$**

How many legs are on six ants? **$6 \times 6 = 36$**

How many legs are on ten worms? **$10 \times 0 = 0$**