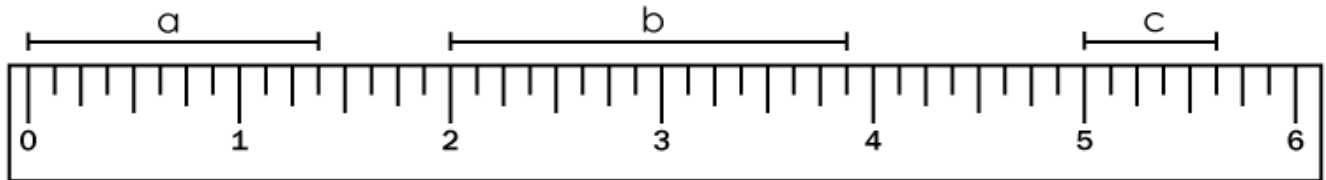


Name: _____

Measuring With a Ruler

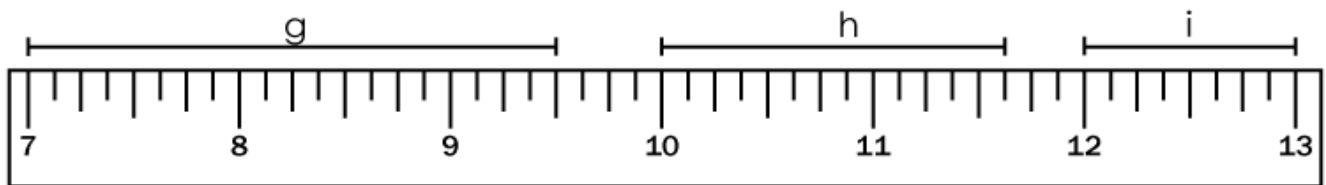
Measure to the nearest $\frac{1}{8}$ inch for each line segment using the ruler shown.



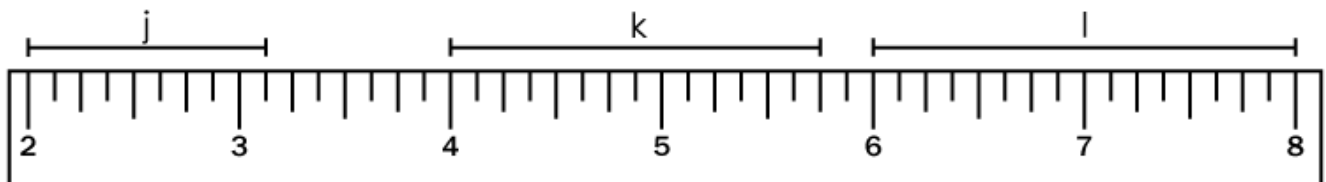
a = _____ b = _____ c = _____



d = _____



g = _____ h = _____ i = _____

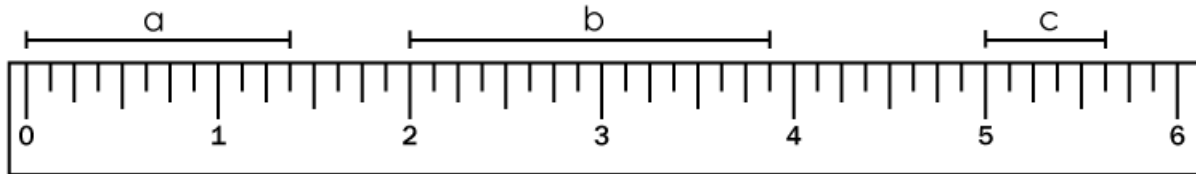


j = _____ k = _____ l = _____

ANSWER KEY

Measuring With a Ruler

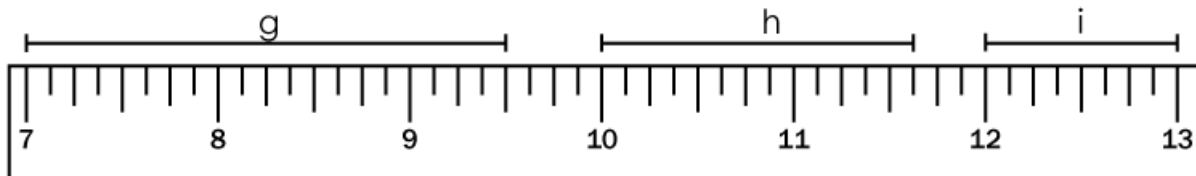
Measure to the nearest $\frac{1}{8}$ inch for each line segment using the ruler shown.



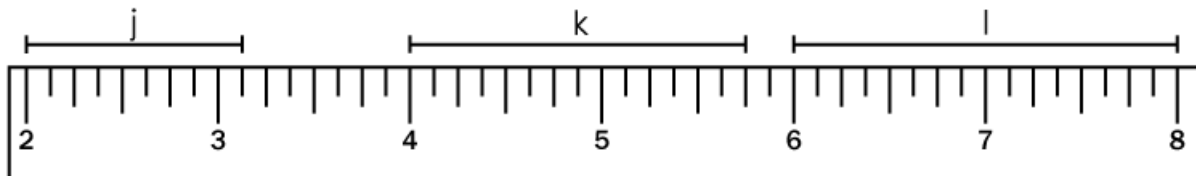
a = $1 \frac{3}{8}$ inches b = $1 \frac{7}{8}$ inches c = $\frac{5}{8}$ inch



d = $\frac{1}{8}$ inch



g = $2 \frac{1}{2}$ inches h = $1 \frac{5}{8}$ inches i = 1 inch



j = $1 \frac{1}{8}$ inches k = $1 \frac{3}{4}$ inches l = 2 inches