

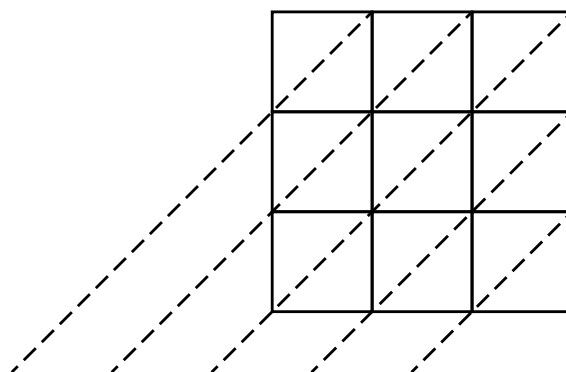
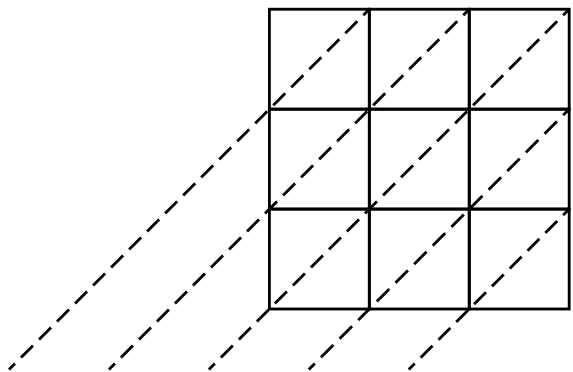


Name: \_\_\_\_\_

# Lattice Multiplication

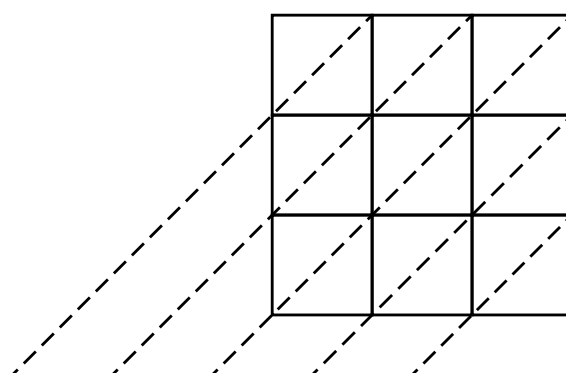
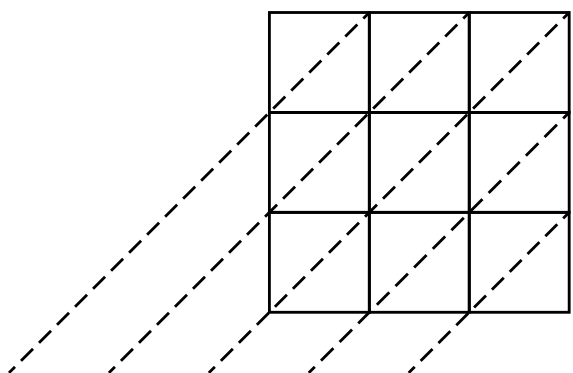
c. Find  $384 \times 267$ .

d. Find  $668 \times 695$ .



# ~ PREVIEW ~

Please log in or register to download the printable version of this worksheet.



Answer: \_\_\_\_\_

Answer: \_\_\_\_\_

## Lattice Multiplication

Find  $145 \times 415$

	1	4	5	
4	0 4	1 6	2 0	
1	0 1	0 4	0 5	
5	0 5	2 0	2 5	

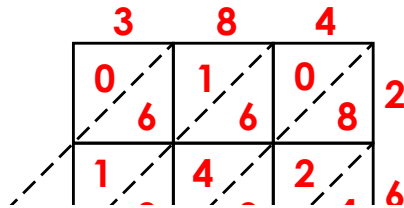


# ~ PREVIEW ~

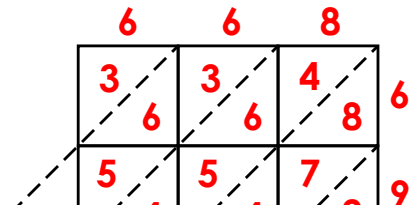
Please log in or register to download the printable version of this worksheet.

## Lattice Multiplication

c. Find  $384 \times 267$ .



d. Find  $668 \times 695$ .



# ~ PREVIEW ~

Please log in or register to download the printable version of this worksheet.

ANSWER: 101628

ANSWER: 463840