

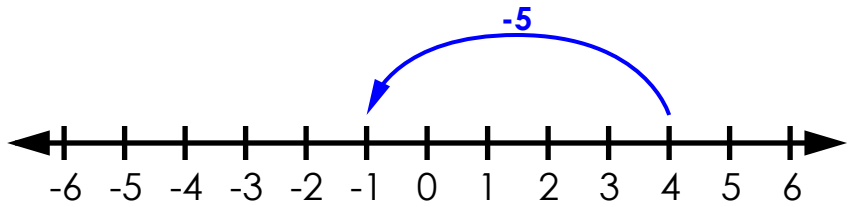
Name: \_\_\_\_\_

# Adding Integers

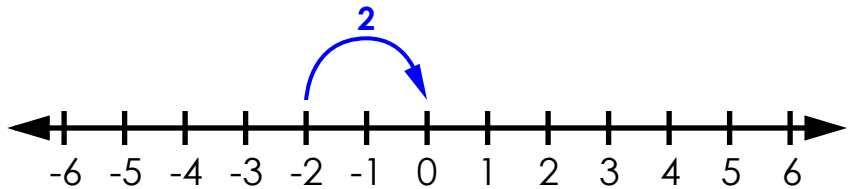
Use the number lines to solve.

examples:

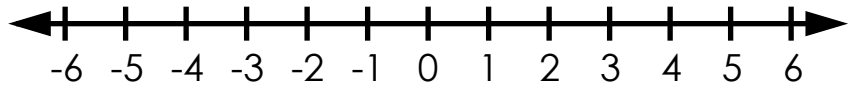
$$4 + (-5) = \underline{-1}$$



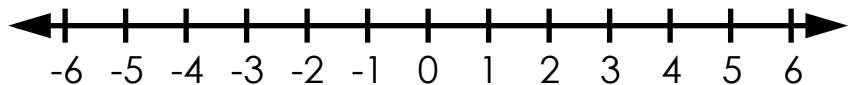
$$-2 + 2 = \underline{0}$$



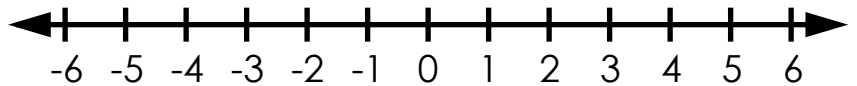
a.  $-3 + 7 =$  \_\_\_\_\_



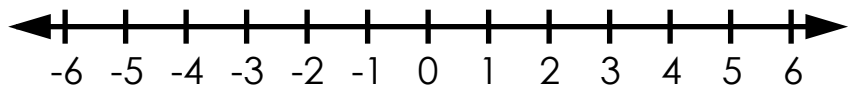
b.  $2 + (-5) =$  \_\_\_\_\_



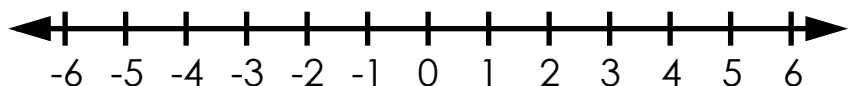
c.  $-1 + (-2) =$  \_\_\_\_\_



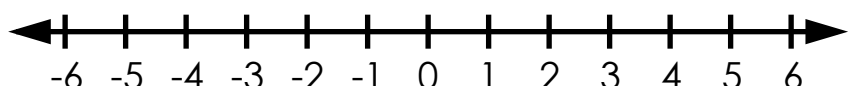
d.  $6 + (-4) =$  \_\_\_\_\_



e.  $-6 + 12 =$  \_\_\_\_\_



f.  $0 + (-1) =$  \_\_\_\_\_



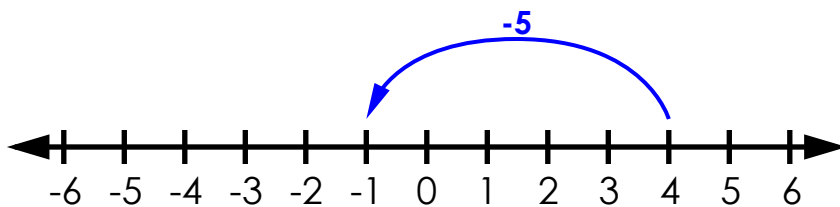
# ANSWER KEY

## Adding Integers

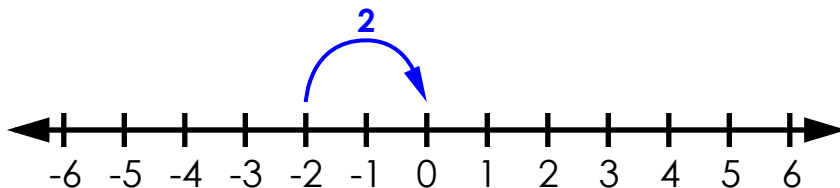
Use the number lines to solve.

examples:

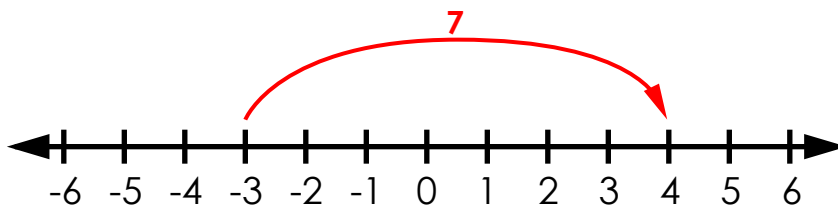
$$4 + (-5) = \underline{-1}$$



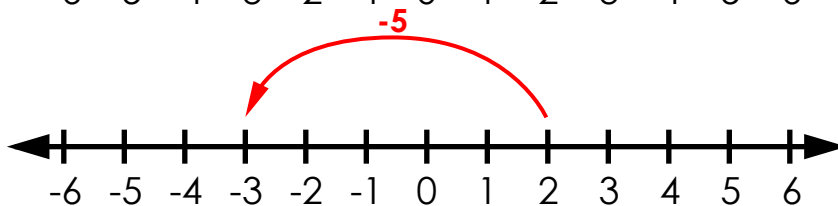
$$-2 + 2 = \underline{0}$$



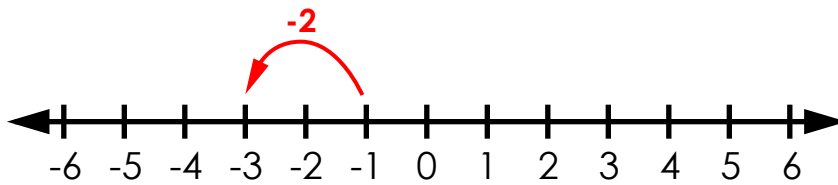
a.  $-3 + 7 = \underline{4}$



b.  $2 + (-5) = \underline{-3}$



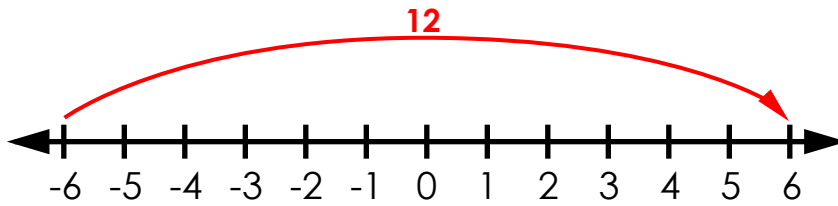
c.  $-1 + (-2) = \underline{-3}$



d.  $6 + (-4) = \underline{2}$



e.  $-6 + 12 = \underline{6}$



f.  $0 + (-1) = \underline{-1}$

