


Name: _____

Making a Line Plot

Miss Smith is a music teacher. She gave her students a 6-question quiz about famous composers. The list below shows the scores her students received on the quiz.

6, 6, 5, 4, 6, 4, 5, 3, 6, 0, 1, 6, 3, 3, 6, 5

Use the data above to make a line plot. Be sure you write numbers on the axis, label the axis, write a title, and use Xs to represent students.



title: _____



axis label: _____

1. How many students scored exactly 3? 1. _____
2. How many students scored higher than 3? 2. _____
3. How many students scored less than 3? 3. _____
4. What score did the highest number of students receive? 4. _____

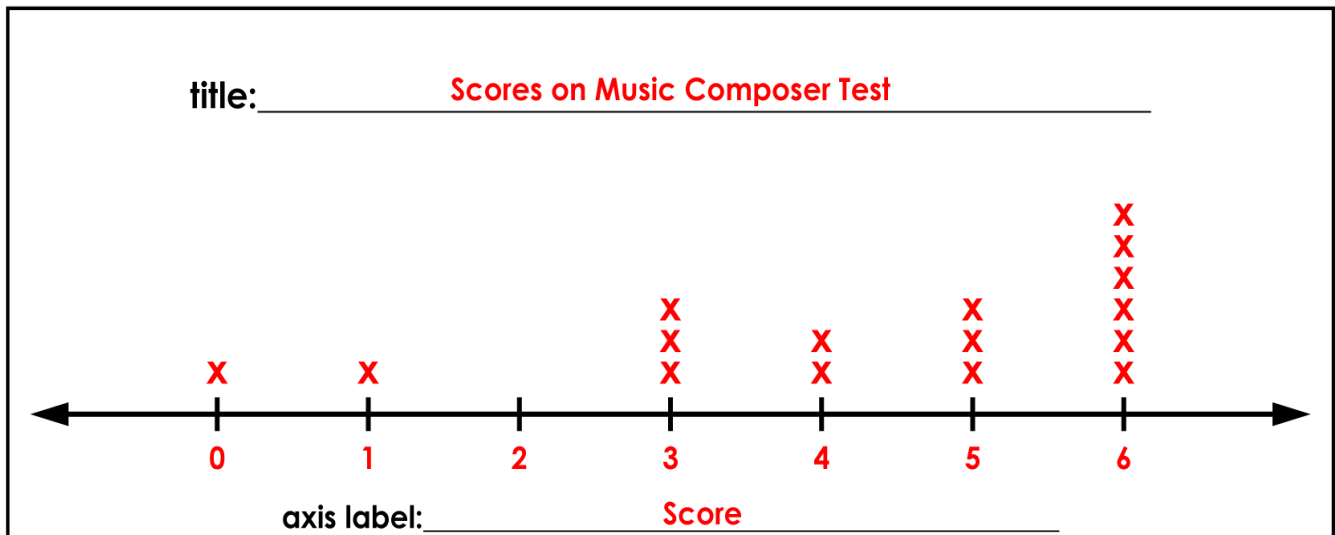

ANSWER KEY

Making a Line Plot

Miss Smith is a music teacher. She gave her students a 6-question quiz about famous composers. The list below shows the scores her students received on the quiz.

6, 6, 5, 4, 6, 4, 5, 3, 6, 0, 1, 6, 3, 3, 6, 5

Use the data above to make a line plot. Be sure you write numbers on the axis, label the axis, write a title, and use Xs to represent students.



- | | |
|---|--|
| 1. How many students scored exactly 3? | 1. <u> 3 students </u> |
| 2. How many students scored higher than 3? | 2. <u> 11 students </u> |
| 3. How many students scored less than 3? | 3. <u> 2 students </u> |
| 4. What score did the highest number of students receive? | 4. <u> 6 points </u> |