



Name: _____

Lines, Rays, and Line Segments

Geometry

Tell whether each figure below is a line, line segment, or ray.



Match each vocabulary word on the left with its definition on the right.

1. _____ line

a. a straight path that goes on forever in one direction

2. _____ line segment

b. a straight path that goes on forever in two directions

3. _____ ray

c. part of a line that has two endpoints

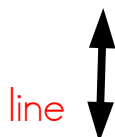

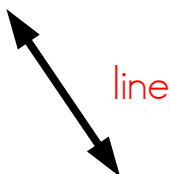
Name: _____

ANSWER KEY

Lines, Rays, and Line Segments

Geometry

Tell whether each figure below is a line, line segment, or ray.



Match each vocabulary word on the left with its definition on the right.

- | | |
|--------------------------|---|
| 1. <u>b</u> line | a. a straight path that goes on forever in one direction |
| 2. <u>c</u> line segment | b. a straight path that goes on forever in two directions |
| 3. <u>a</u> ray | c. part of a line that has two endpoints |