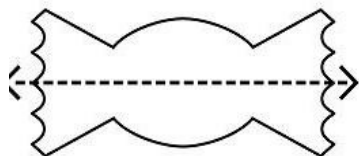


Name: _____

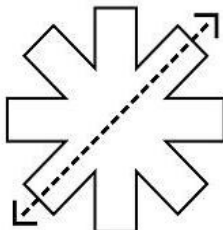
Symmetry

Tell whether the dotted line on each shape represents a line of symmetry. Write yes or no.


a.



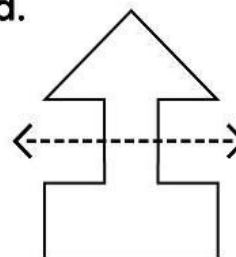
b.



c.



d.



Draw a

e.

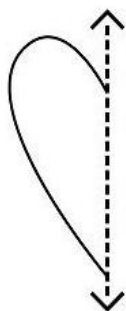


Preview

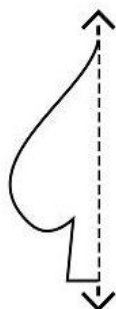
Please log in to download
the printable version of this worksheet.

Draw the second half of each symmetrical shape.

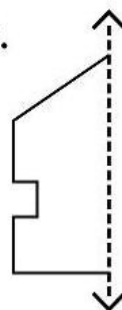
i.



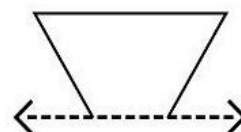
j.



k.



l.

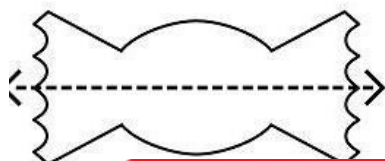


ANSWER KEY

Symmetry

Tell whether the dotted line on each shape represents a line of symmetry. Write yes or no.

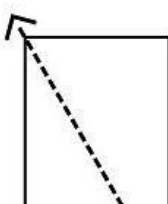
a.



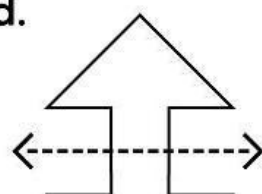
b.



c.



d.



Preview

Please log in to download
the printable version of this worksheet.



Draw a

e.



Draw the

i.

