

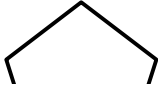

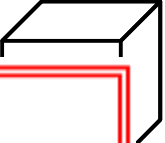

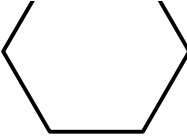
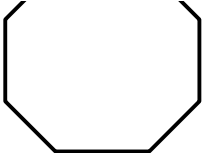
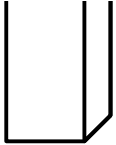
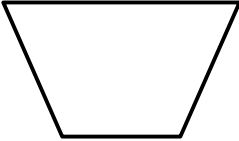

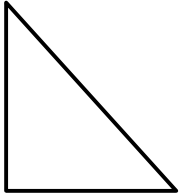
Name: \_\_\_\_\_

# Solids and Polygons

Write the name of each shape.

**Word Box**  
(You will not use all of the words)

cylinder	rectangular prism	cube	sphere
octagon	pentagon	hexagon	rectangle
parallelogram	triangle	square	trapezoid

1.		2.		3.	
					
4.		5.		6.	
7.		8.		9.	
_____	_____	_____	_____	_____	_____
_____	_____	_____	_____	_____	_____

# Solids and Polygons

Write the name of each shape.

## Word Box

(You will not use all of the words)

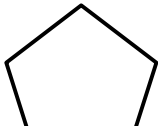
cylinder  
octagon  
parallelogram

rectangular prism  
pentagon  
triangle

cube  
hexagon  
square

sphere  
rectangle  
trapezoid

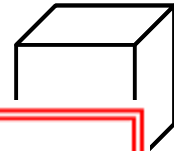
1.



2.



3.



4.



# PREVIEW

Please log in or register to download the printable version of this worksheet.

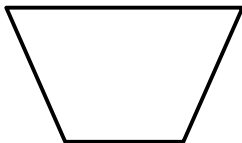


hexagon

octagon

rectangular prism

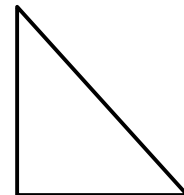
7.



8.



9.



trapezoid

parallelogram

triangle