

Name: _____

Quadrilaterals

Match the quadrilateral with its definition.

- _____ 1. All sides are the same length.
There are four right angles.
- _____ 2. There is only one pair of parallel sides.
- _____ 3. Opposite sides are parallel and the
same length. There are four right angles.
- _____ 4. There are two pairs of parallel sides.
All sides are the same length.
- _____ 5. There are two pairs of opposite parallel
sides.

a.



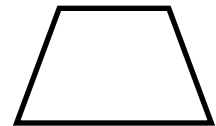
Parallelogram

b.



Rectangle

c.



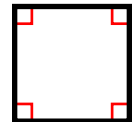
Trapezoid

d.



Rhombus

e.



Square

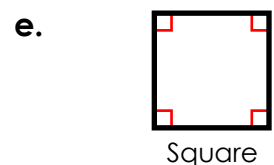
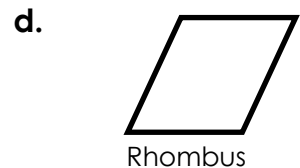
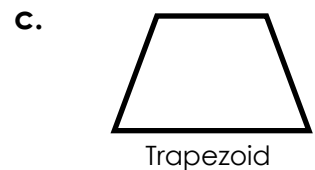
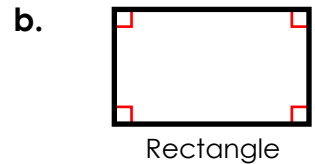
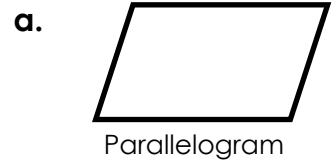
6. List two ways a rectangle and square are alike and one way in which they are different.

ANSWER KEY

Quadrilaterals

Match the quadrilateral with its definition.

- e 1. All sides are the same length.
There are four right angles.
- c 2. There is only one pair of parallel sides.
- b 3. Opposite sides are parallel and the
same length. There are four right angles.
- d 4. There are two pairs of parallel sides.
All sides are the same length.
- a 5. There are two pairs of opposite parallel
sides.



6. List two ways a rectangle and square are alike and one way in which they are different.

Rectangles and squares are alike in that both have two pairs of parallel sides
and four right angles. They are different because a square must have four
equal sides lengths and a rectangle has two pairs of equal side lengths.