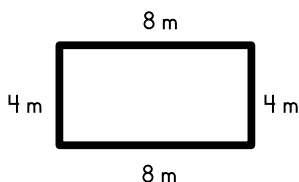


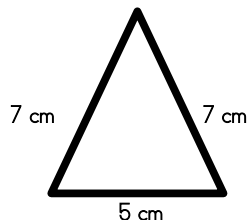
Name: _____

Perimeter

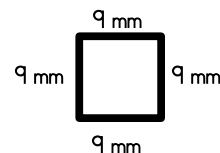
Find the perimeter of each polygon.



Perimeter = _____



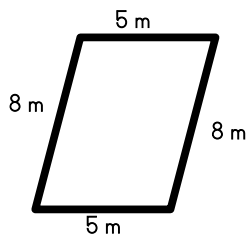
Perimeter = _____



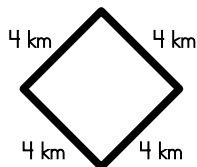
Perimeter = _____

4 km 8 km 6 cm
PREVIEW
Please log in or register to download the printable version of this worksheet.

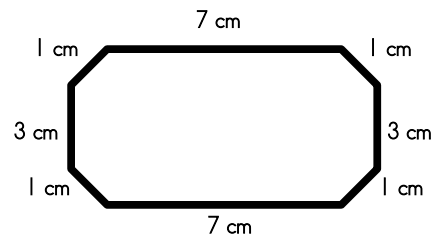
Perimeter _____



Perimeter = _____



Perimeter = _____



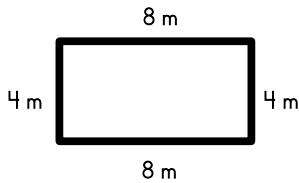
Perimeter = _____

Bonus Box
Write the names of the polygons pictured above.

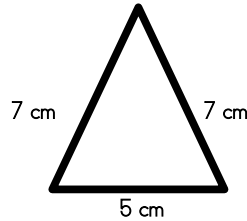
Name: _____

Perimeter – ANSWER KEY

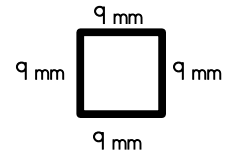
Find the perimeter of each polygon.



Perimeter = 24 m

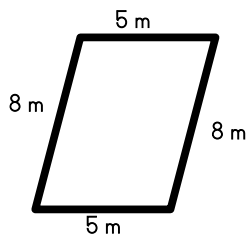


Perimeter = 19 cm

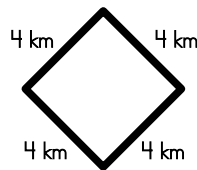


Perimeter = 36 mm

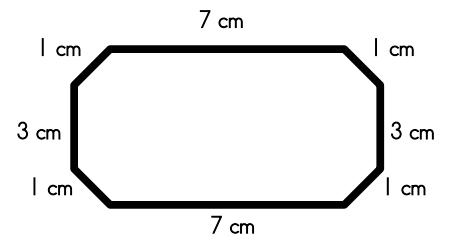
4 km 16 km 6 cm 16 km
Perimeter = 20 cm



Perimeter = 26 m



Perimeter = 16 km



Perimeter = 24 cm

Bonus Box
Write the names of the polygons pictured above.

- Answer to bonus box:
- | | | |
|---------------|-------------------|-----------|
| rectangle | triangle | square |
| trapezoid | hexagon | rectangle |
| parallelogram | diamond or square | octagon |