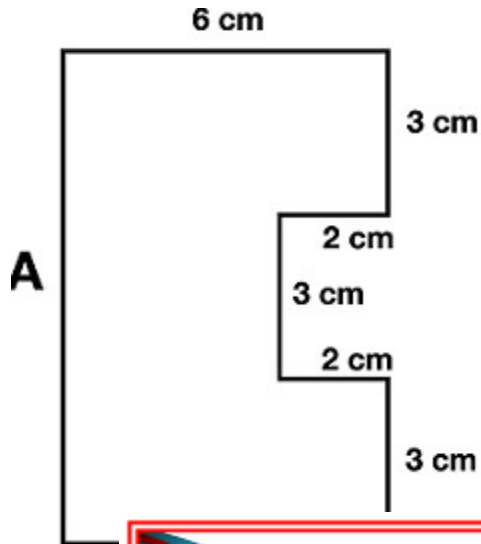


Name: _____

Perimeter

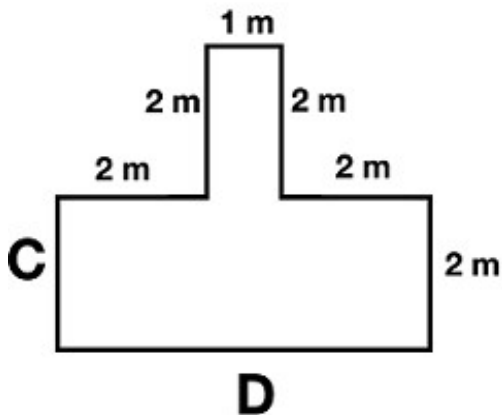


What is the length of side B? _____

Explain how you found the length of side B.

What is the length of side A? _____

Explain how you found the length of side A.



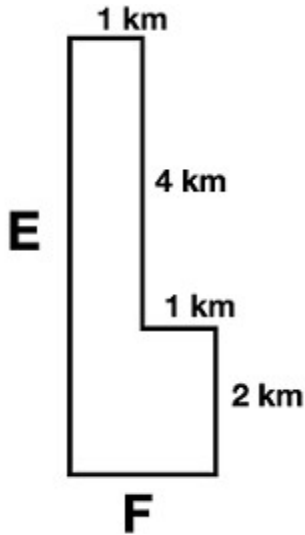
What is the length of side C? _____

What is the length of side D? _____

Explain how you found the length of side D.

What is the perimeter of the shape? _____

Perimeter - Continued

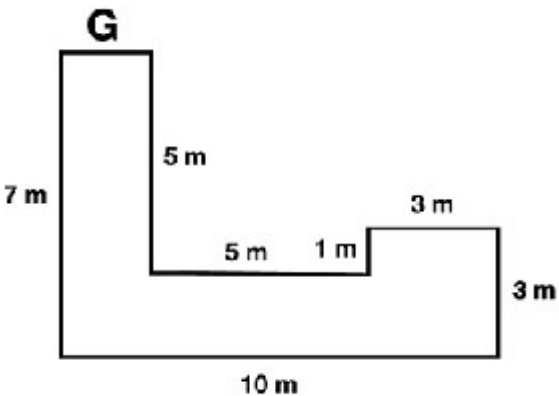


What is the length of side E? _____

Explain how you found the length of side E.

What is the length of side F? _____

Explain how you found the length of side F.

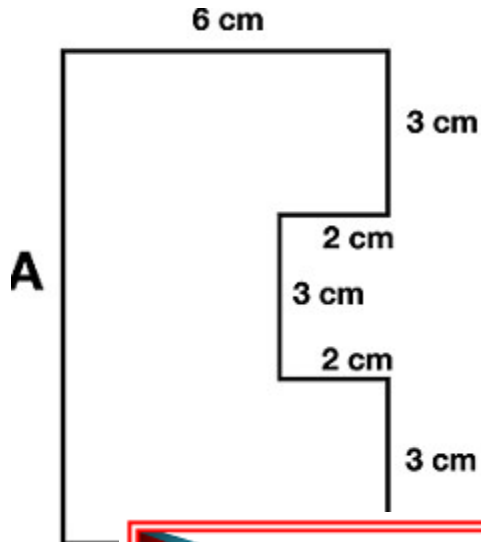


Explain how you found the length of side G.

What is the perimeter of the shape? _____

Name: _____

Perimeter - ANSWER KEY



What is the length of side B? 6 cm

Explain how you found the length of side B.

It is the same length as the line segment on the opposite side.

What is the length of side A? 9 cm

Explain how you found the length of side A.

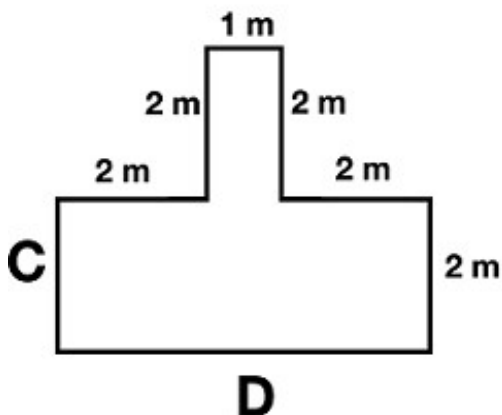
Add the lengths of the parallel line segments on the opposite side. (3+3+3)



PREVIEW

Please log in or register to download the printable version of this worksheet.

_____ cm



Explain how you found the length of side C.

It is the same length as the line segment on the opposite side.

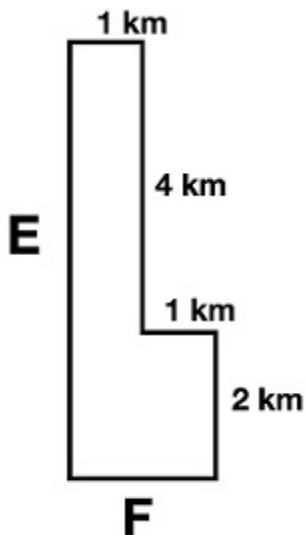
What is the length of side D? 5 cm

Explain how you found the length of side D.

Add the length of the parallel line segments on the opposite side. (2+1+2)

What is the perimeter of the shape? 18 cm

Perimeter - Continued



What is the length of side E? **6 cm**

Explain how you found the length of side E.

Add the lengths of the parallel line segments on the opposite side. (4+2)

What is the length of side F? **2 cm**

Explain how you found the length of side F.

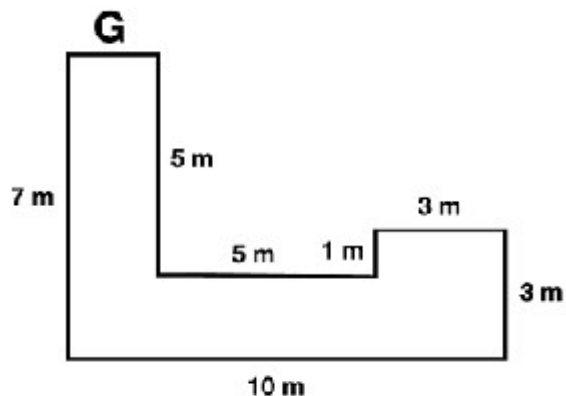
Add the lengths of the parallel line segments on the opposite side. (1+1)



~ PREVIEW ~

Please log in or register to download the printable version of this worksheet.

cm



Explain how you found the length of side G.

Subtract 8 (or 5+3) from the length of the 10 cm side.

What is the perimeter of the shape? **36 cm**