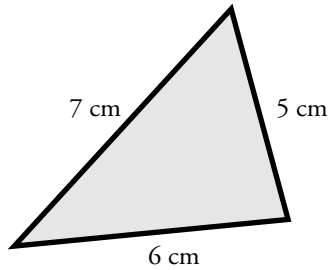


Name: _____

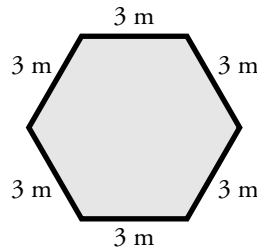
Perimeter of a Polygon

Find the perimeter of each shape by adding the lengths of each side.

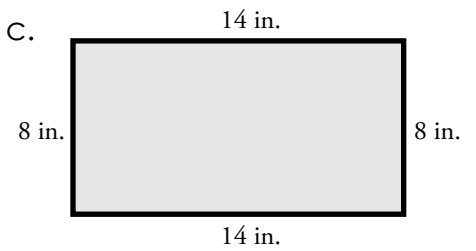
a.



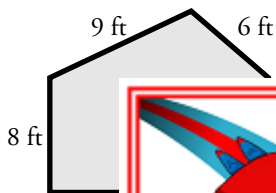
b.



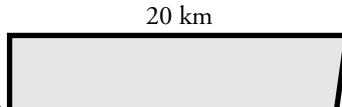
c.



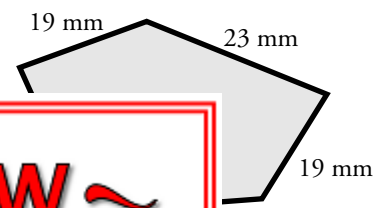
d.



e.




f.

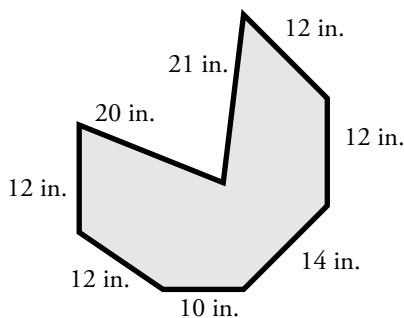


PREVIEW
Please log in or register to download the printable version of this worksheet.

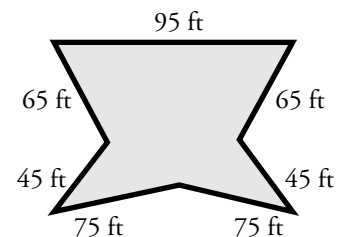
g.



h.



i.



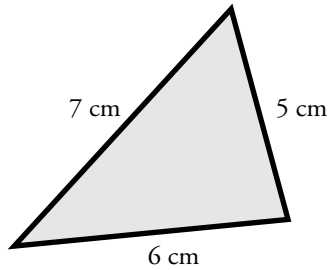
Challenge: Draw a square with a perimeter of 180 yards. Label the lengths of each side.

ANSWER KEY

Perimeter of a Polygon

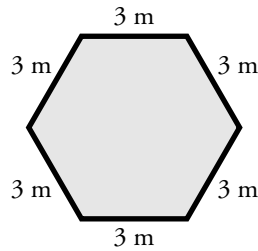
Find the perimeter of each shape by adding the lengths of each side.

a.



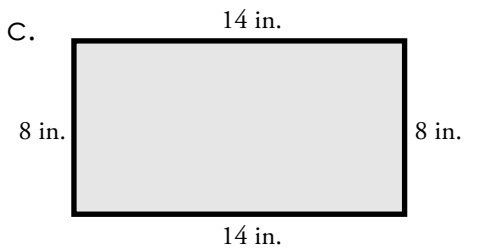
18 cm

b.



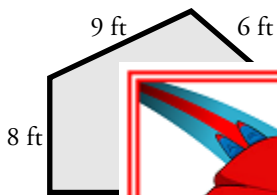
18 m

c.

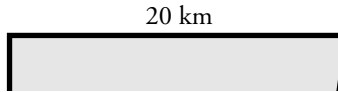


44 in.

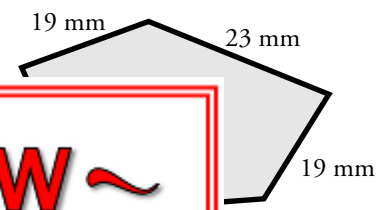
d.



e.




f.



PREVIEW
Please log in or register to download
the printable version of this worksheet.

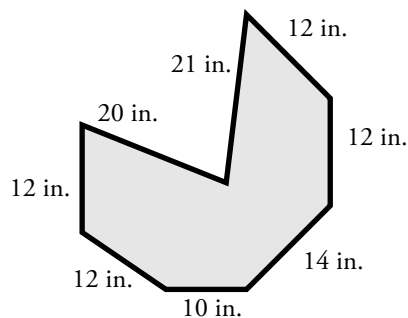
m

g.



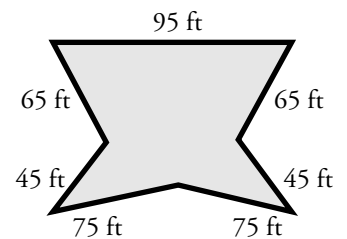
60 cm

h.



113 in.

i.



465 ft.

Challenge: Draw a square with a perimeter of 180 yards.
Label the lengths of each side.

