


Name: \_\_\_\_\_

Page 1

## Math Notes: Types of Angles

angle – two \_\_\_\_\_ that meet at a single \_\_\_\_\_.


Draw some angles.



right angle – an angle that has a \_\_\_\_\_.

A right angle is sometimes called a \_\_\_\_\_.

Use the corner of an index card to draw some right angles.



Look around the room. Where do you see right angles?

---

---


Name: \_\_\_\_\_

## Math Notes: Types of Angles

acute angle – an angle that is \_\_\_\_\_ than a 90 degree angle.

An acute angle looks like a book that is more \_\_\_\_\_ than \_\_\_\_\_.

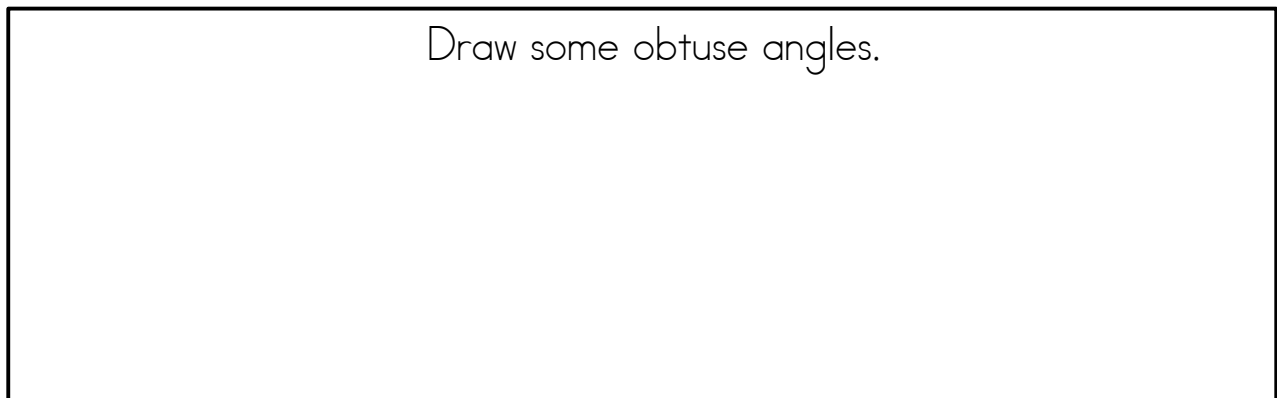
Draw some acute angles.



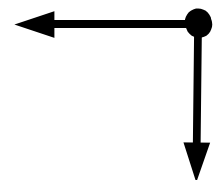
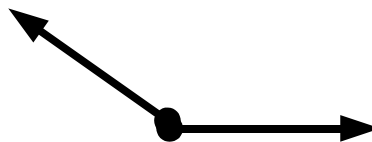
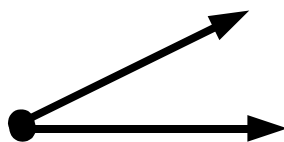
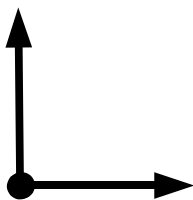
obtuse angle – an obtuse that is \_\_\_\_\_ than a 90 degree angle.

An obtuse angle looks like a book that is more \_\_\_\_\_ than \_\_\_\_\_.

Draw some obtuse angles.



Tell whether each angle below is acute, obtuse, or right.




Name: \_\_\_\_\_

Page 1

Math Notes: Types of Angles  
TEACHER NOTES

angle – two rays that meet at a single endpoint.


Draw some angles.



right angle – an angle that has a square corner.

A right angle is sometimes called a 90 degree angle.

Use the corner of an index card to draw some right angles.



Look around the room. Where do you see right angles?

---

---

Name: \_\_\_\_\_

## Math Notes: Types of Angles

acute angle – an angle that is less than a 90 degree angle.

An acute angle looks like a book that is more closed than open.

Draw some acute angles.

obtuse angle – an obtuse that is greater than a 90 degree angle.

An obtuse angle looks like a book that is more open than closed.

Draw some obtuse angles.

Tell whether each angle below is acute, obtuse, or right.

