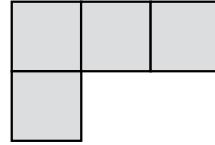


Name: _____

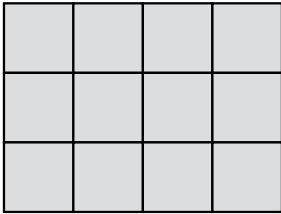
Area

Area is the number of **square units** that will fit inside a figure.

The area of this figure is **4 square units**.




①



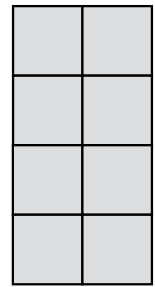
Area = _____

②



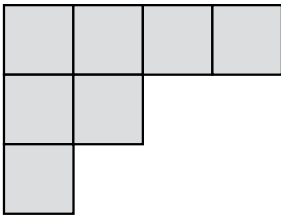
Area = _____

③



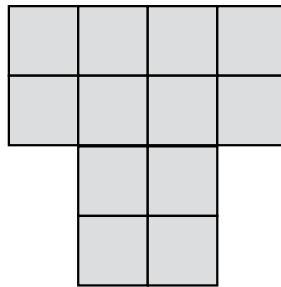
Area = _____

④



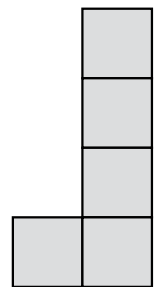
Area = _____

⑤



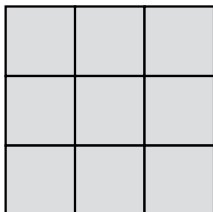
Area = _____

⑥



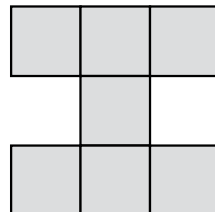
Area = _____

⑦



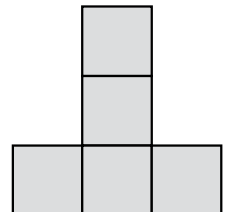
Area = _____

⑧



Area = _____

⑨



Area = _____

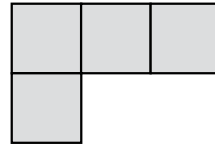
ANSWER KEY

Name: _____


Area

Area is the number of **square units** that will fit inside a figure.

The area of this figure is **4 square units**.




①



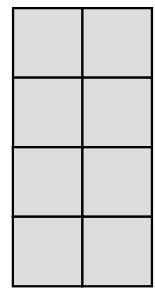
Area = 12 square units

②



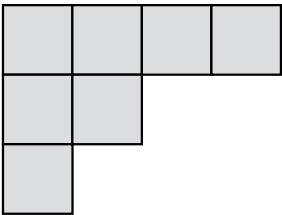
Area = 8 square units

③



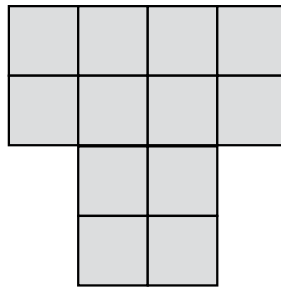
Area = 8 square units

④



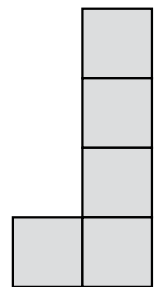
Area = 7 square units

⑤



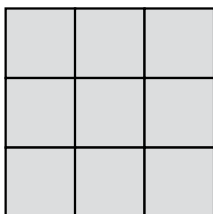
Area = 12 square units

⑥



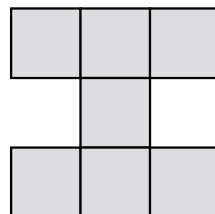
Area = 5 square units

⑦



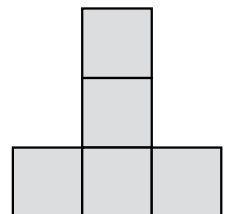
Area = 9 square units

⑧



Area = 7 square units

⑨



Area = 5 square units