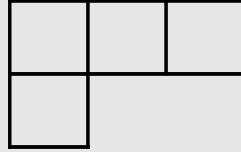


Name: \_\_\_\_\_

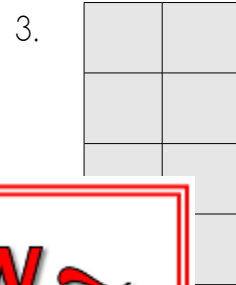
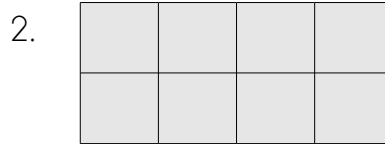
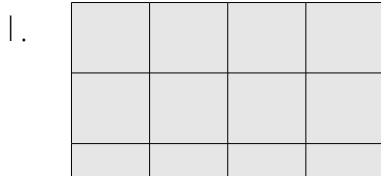
Area – Basic

Area is the number of square units that will fit inside a figure.

The area of this figure is 4 square units.

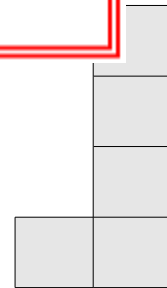
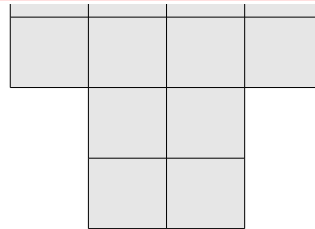


Find the area of each shape. Don't forget to write "square units."



Area = \_\_\_\_\_

4.



Area = \_\_\_\_\_

Area = \_\_\_\_\_

Area = \_\_\_\_\_

7.

8.

9.

Area = \_\_\_\_\_

Area = \_\_\_\_\_

Area = \_\_\_\_\_

**PREVIEW**  
Please log in or register to download the printable version of this worksheet.