

Name: _____

Drawing Angles

Use a protractor to draw an angle with the measurements shown.

$$\angle DEF = 50^\circ$$

$$\angle RST = 95^\circ$$

$$\angle LMN = 120^\circ$$

$$\angle ABC = 35^\circ$$

$$\angle UVW = 15^\circ$$

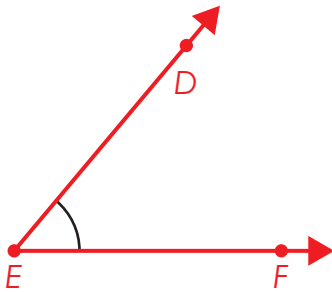
$$\angle GHI = 145^\circ$$

ANSWER KEY

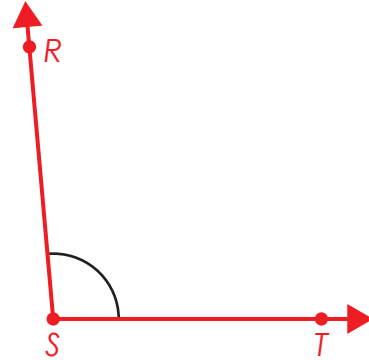
Drawing Angles

Use a protractor to draw an angle with the measurements shown.

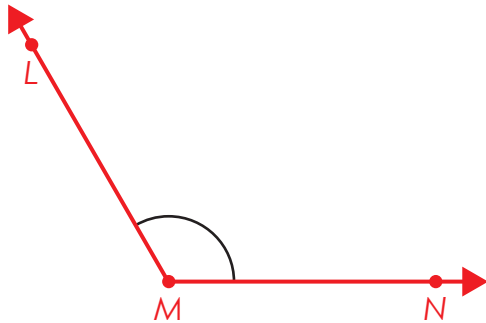
$$\angle DEF = 50^\circ$$



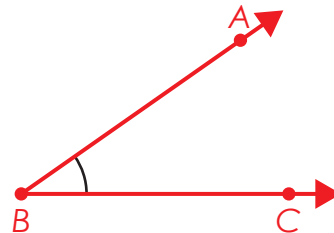
$$\angle RST = 95^\circ$$




$$\angle LMN = 120^\circ$$



$$\angle ABC = 35^\circ$$



$$\angle UVW = 15^\circ$$



$$\angle GHI = 145^\circ$$

