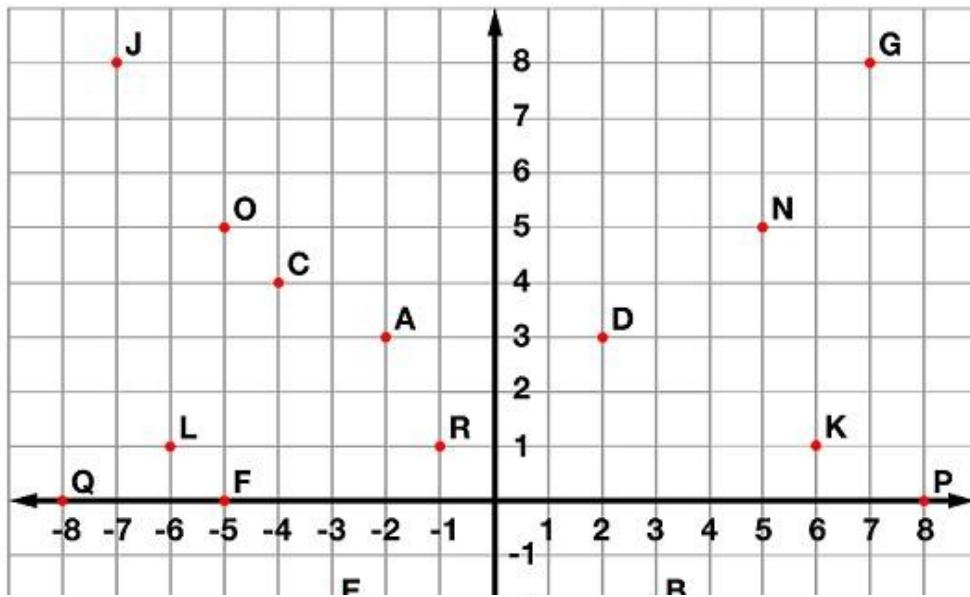


Ordered Pairs



Tell what point is located at each ordered pair.

- | | | |
|---------------------|--------------------|--------------------|
| 1. $(3, -2)$ _____ | 2. $(2, 3)$ _____ | 3. $(-5, 5)$ _____ |
| 4. $(-7, -8)$ _____ | 5. $(-4, 4)$ _____ | 6. $(-5, 0)$ _____ |

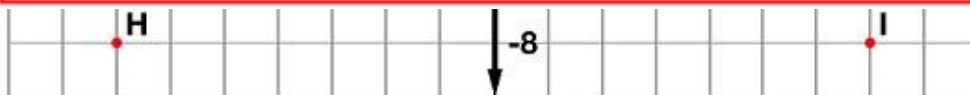
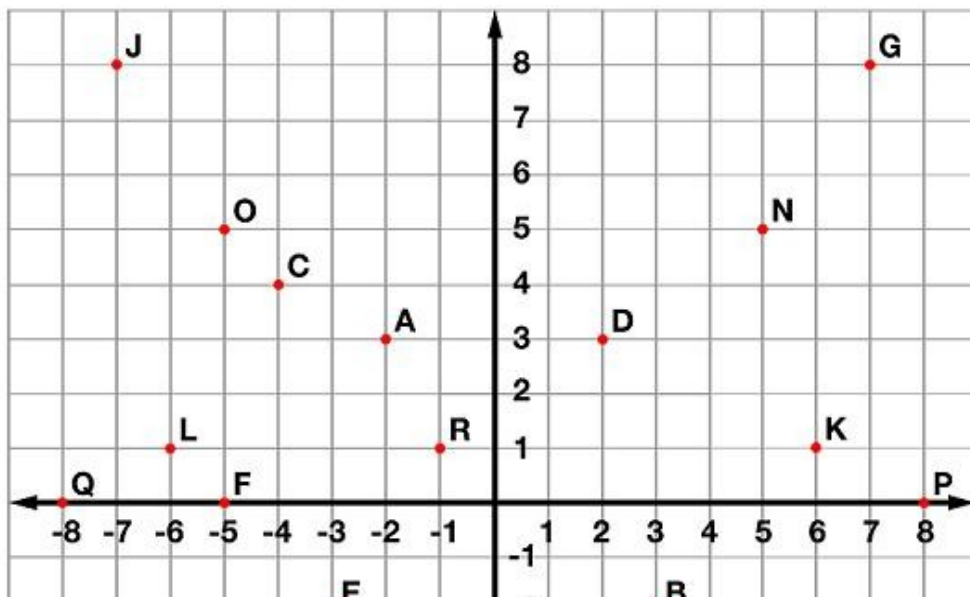
Write the ordered pair for each given point.

- | | | |
|-------------|-------------|-------------|
| 7. E _____ | 8. M _____ | 9. P _____ |
| 10. G _____ | 11. Q _____ | 12. N _____ |

Plot the following points on the coordinate grid.

- | | | |
|------------------|-----------------|----------------|
| 13. S $(-6, -3)$ | 14. T $(2, -4)$ | 15. U $(5, 8)$ |
|------------------|-----------------|----------------|

Ordered Pairs - ANSWER KEY



Tell what point is located at each ordered pair.

- | | | |
|------------------------|-----------------------|-----------------------|
| 1. $(3, -2)$ B | 2. $(2, 3)$ D | 3. $(-5, 5)$ O |
| 4. $(-7, -8)$ H | 5. $(-4, 4)$ C | 6. $(-5, 0)$ F |

Write the ordered pair for each given point.

- | | | |
|---|---|--|
| 7. E <u>$(-3, -2)$</u> | 8. M <u>$(1, -6)$</u> | 9. P <u>$(8, 0)$</u> |
| 10. G <u>$(7, 8)$</u> | 11. Q <u>$(-8, 0)$</u> | 12. N <u>$(5, 5)$</u> |

Plot the following points on the coordinate grid.

- | | | |
|---|--|---|
| 13. S $(-6, -3)$ | 14. T $(2, -4)$ | 15. U $(5, 8)$ |
|---|--|---|