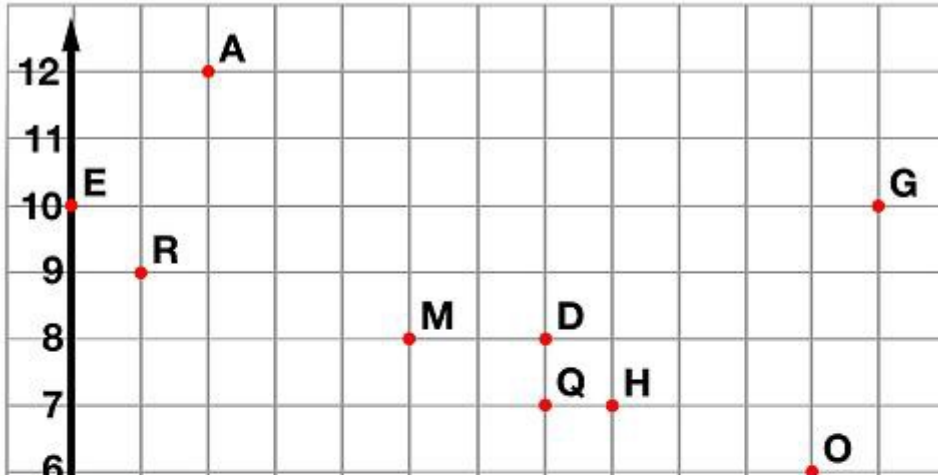


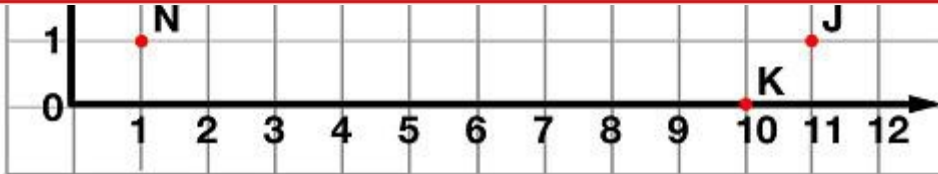
Name: _____

Ordered Pairs



PREVIEW

Please log in or register to download the printable version of this worksheet.



Tell what point is located at each ordered pair.

- | | | |
|------------------|-----------------|-----------------|
| 1. (5,8) _____ | 2. (12,2) _____ | 3. (8,7) _____ |
| 4. (12,10) _____ | 5. (7,7) _____ | 6. (0,10) _____ |

Write the ordered pair for each given point.

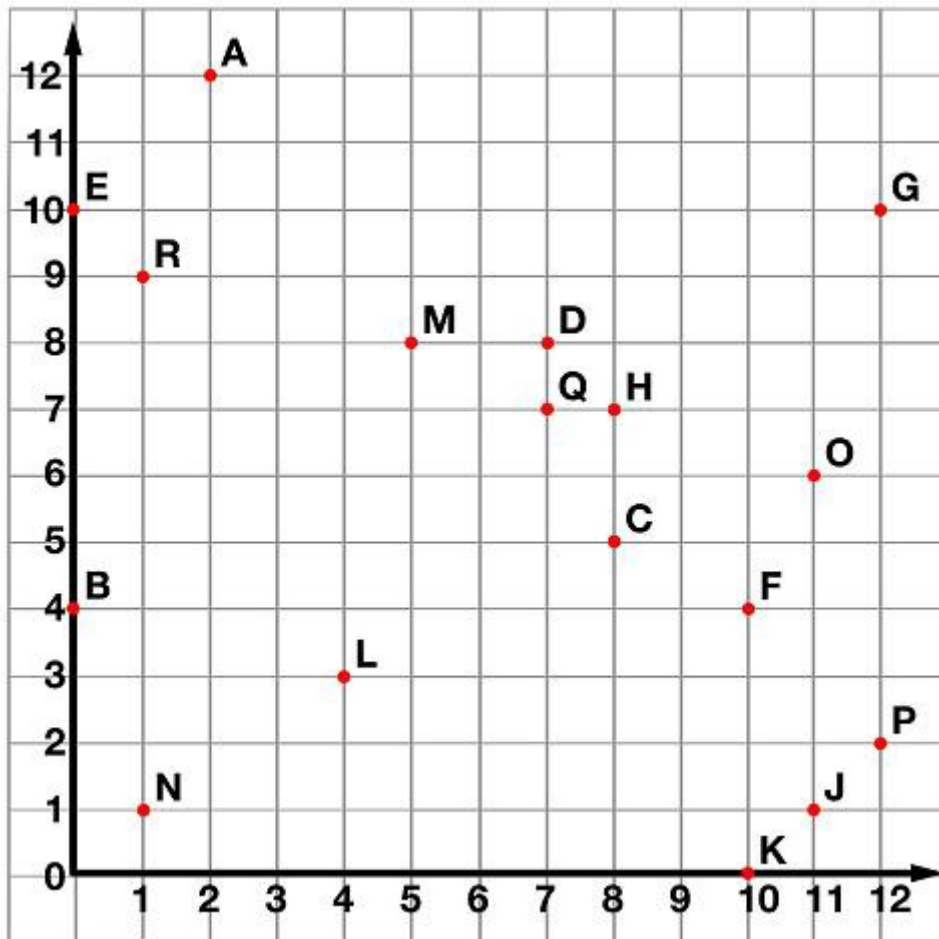
- | | | |
|-------------|-------------|-------------|
| 7. N _____ | 8. L _____ | 9. J _____ |
| 10. A _____ | 11. B _____ | 12. E _____ |

Plot the following points on the coordinate grid.

- | | | |
|--------------|-------------|--------------|
| 13. S (6,11) | 14. T (3,5) | 15. U (9,12) |
|--------------|-------------|--------------|

ANSWER KEY

Ordered Pairs



Tell what point is located at each ordered pair.

1. (5,8) **A**
4. (12,10) **G**

Write the ordered pair for each point.

7. N **(1,1)**
10. A **(2,12)**



~ PREVIEW ~

Please log in or register to download the printable version of this worksheet.

Plot the following points on the coordinate grid.

13. S **(6,11)**
14. T **(3,5)**
15. U **(9,12)**