

Name: \_\_\_\_\_

# Congruent Shapes

Tell whether each pair of shapes is congruent or not congruent.

1.



\_\_\_\_\_

2.



\_\_\_\_\_

3.



\_\_\_\_\_

4.



**PREVIEW**

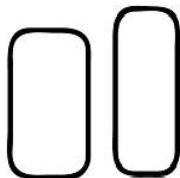
Please log in or register to download the printable version of this worksheet.

\_\_\_\_\_

\_\_\_\_\_


\_\_\_\_\_

7.



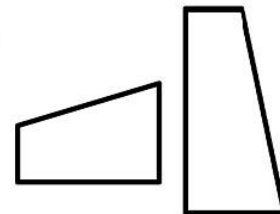
\_\_\_\_\_

8.



\_\_\_\_\_

9.

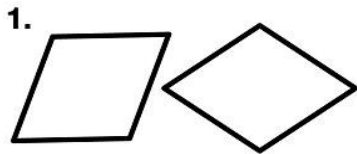


\_\_\_\_\_

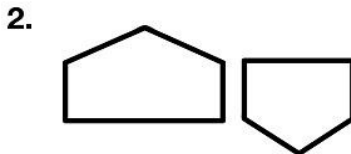
Name: \_\_\_\_\_

# Congruent Shapes - ANSWERS


Tell whether each pair of shapes is congruent or not congruent.



**congruent**



**not congruent**



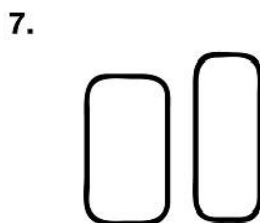
**congruent**

4.  **PREVIEW**  
Please log in or register to download the printable version of this worksheet.


**congruent**

**not congruent**

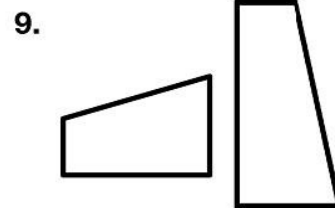
**congruent**



**not congruent**



**congruent**



**not congruent**