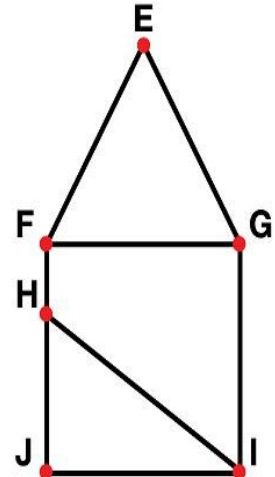


Find the Angles

Acute Angles	Obtuse Angles	Right Angles

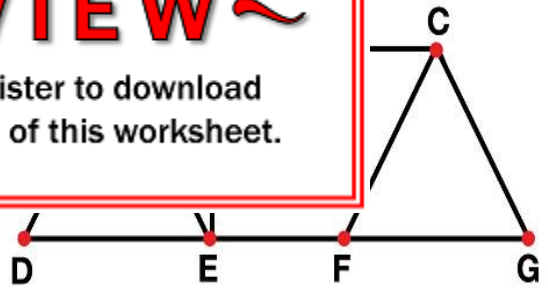


Acute Angle		

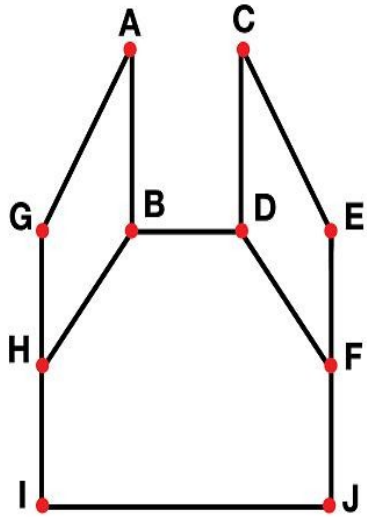


~ PREVIEW ~

Please log in or register to download the printable version of this worksheet.



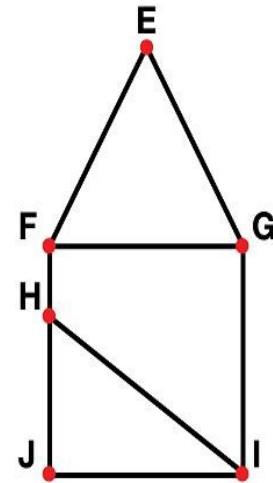
Acute Angles	Obtuse Angles	Right Angles



Find the Angles - ANSWER KEY

Answers key may not include all possible answers.

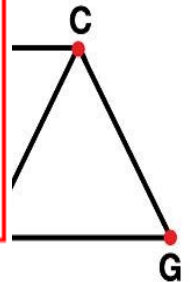
Acute Angles	Obtuse Angles	Right Angles
<p style="color: red; margin: 0;">FEG, JHI, HIJ, IHJ, FGE, EGF, EFG, FEG, GEF, HIG, GIH</p>	<p style="color: red; margin: 0;">FHI, IHF, HFE, EFH, EGI, IGE</p>	<p style="color: red; margin: 0;">HFG, GFH, GIJ, JIG, IJH, HJI</p>



Acute Angles
<p style="color: red; margin: 0;">ADE, EAD, BEA, BAE, EDA, DEA, GFC, CGF, BCF, FCB</p>

PREVIEW

Please log in or register to download the printable version of this worksheet.



Acute Angles	Obtuse Angles	Right Angles
<p style="color: red; margin: 0;">GHB, BHG, DFE, EFD, CDE, ECD, GA, BAG</p>	<p style="color: red; margin: 0;">HGA, AGH, ABH, HBA, FDC, CDF, EFC, FEC, IHB, BHI, DFJ, JFD, FEC, CEF, AGH, HGA</p>	<p style="color: red; margin: 0;">ABD, DBA, BDC, CDB, HIJ, JIH, FJI, IJF</p>

