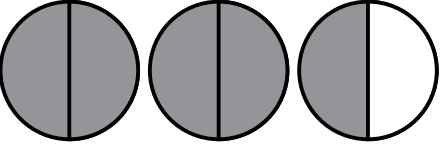

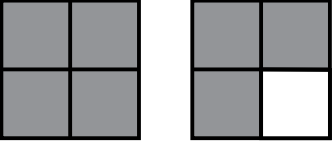
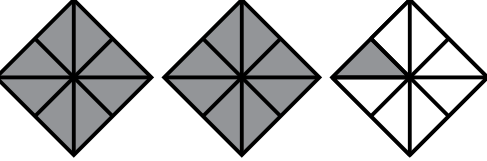
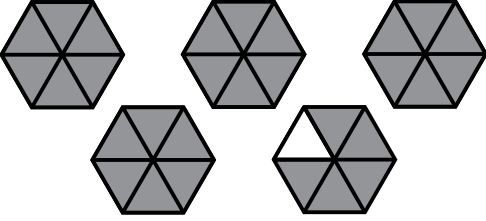
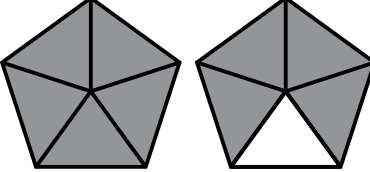
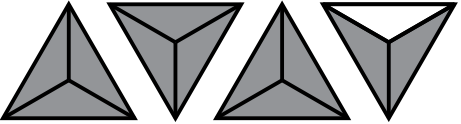

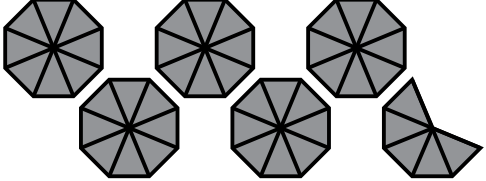



Name: \_\_\_\_\_

# Mixed Numbers and Improper Fractions

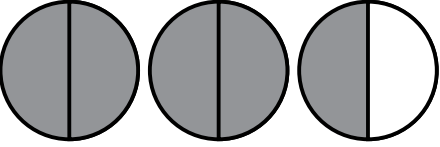

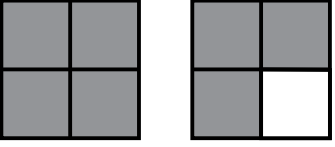
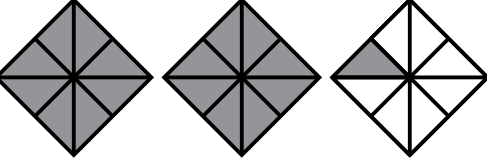
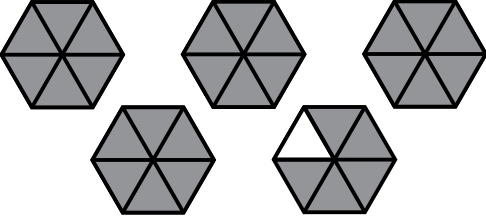
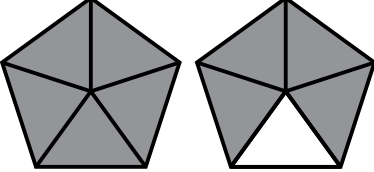
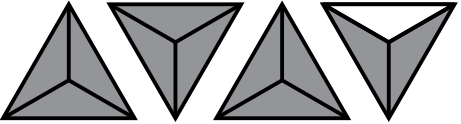

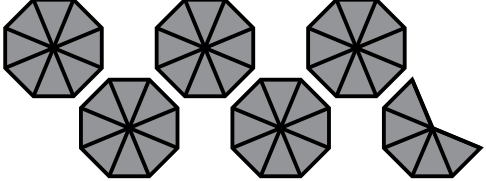

Write the mixed number and improper fraction for the shaded area of each picture.

	<p>Mixed Number</p>	<p>Improper Fraction</p>		<p>Mixed Number</p>	<p>Improper Fraction</p>
	<p>Mixed Number</p>	<p>Improper Fraction</p>		<p>Mixed Number</p>	<p>Improper Fraction</p>
	<p>Mixed Number</p>	<p>Improper Fraction</p>		<p>Mixed Number</p>	<p>Improper Fraction</p>
	<p>Mixed Number</p>	<p>Improper Fraction</p>		<p>Mixed Number</p>	<p>Improper Fraction</p>
	<p>Mixed Number</p>	<p>Improper Fraction</p>		<p>Mixed Number</p>	<p>Improper Fraction</p>

# ANSWER KEY

## Mixed Numbers and Improper Fractions

Write the mixed number and improper fraction for the shaded area of each picture.

	$2 \frac{1}{2}$ Mixed Number	$\frac{5}{2}$ Improper Fraction		$3 \frac{3}{10}$ Mixed Number	$\frac{33}{10}$ Improper Fraction
	$1 \frac{3}{4}$ Mixed Number	$\frac{7}{4}$ Improper Fraction		$2 \frac{1}{8}$ Mixed Number	$\frac{17}{8}$ Improper Fraction
	$4 \frac{5}{6}$ Mixed Number	$\frac{29}{6}$ Improper Fraction		$1 \frac{4}{5}$ Mixed Number	$\frac{9}{5}$ Improper Fraction
	$3 \frac{2}{3}$ Mixed Number	$\frac{11}{3}$ Improper Fraction		$2 \frac{1}{6}$ Mixed Number	$\frac{13}{6}$ Improper Fraction
	$5 \frac{5}{8}$ Mixed Number	$\frac{45}{8}$ Improper Fraction		$3 \frac{1}{2}$ Mixed Number	$\frac{7}{2}$ Improper Fraction