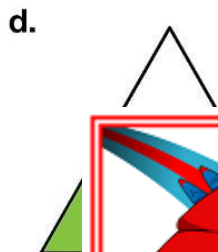
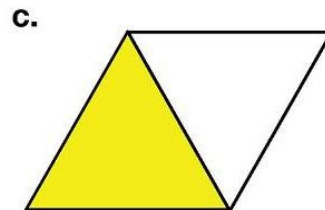
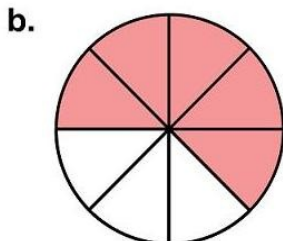
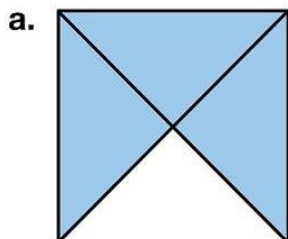


Name: _____

Fractions

Tell what fraction of each shape is shaded.



 **PREVIEW**
Please log in or register to download the printable version of this worksheet.

