



Name: \_\_\_\_\_

# Comparing Fractions

Circle 1



Circle 2



**Step 1: Shade five-eighths of circle 1.**


**Step 2: Shade one-fourth of circle 2.**

**Step 3: Write the larger fraction below.**

Circle 1



Circle 2




**Step 1: Shade one-third of circle 1.**


**Step 2: Shade five-sixths of circle 2.**

**Step 3: Write the larger fraction below.**

Circle 1



Circle 2




**Step 1: Shade two-eighths of circle 1.**


**Step 2: Shade three-sixths of circle 2.**

**Step 3: Write the larger fraction below.**

Circle 1



Circle 2



**Step 1: Shade one-half of circle 1.**

**Step 2: Shade five-twelfths of circle 2.**

**Step 3: Write the larger fraction below.**